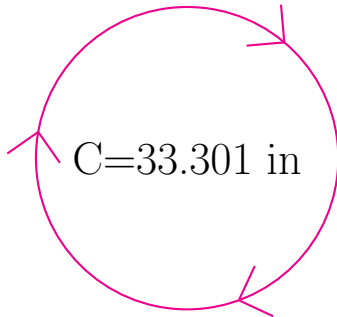
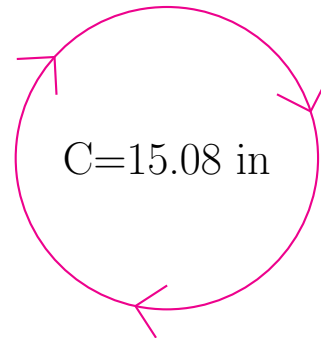


Radio y Diámetro de Círculos (D)

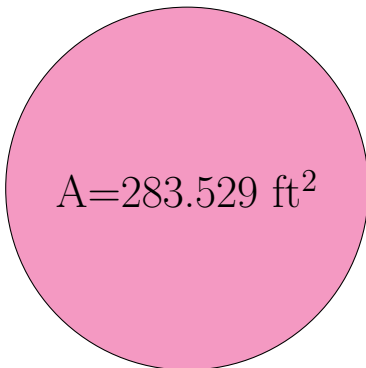
Calcule el radio y el diámetro de cada círculo.



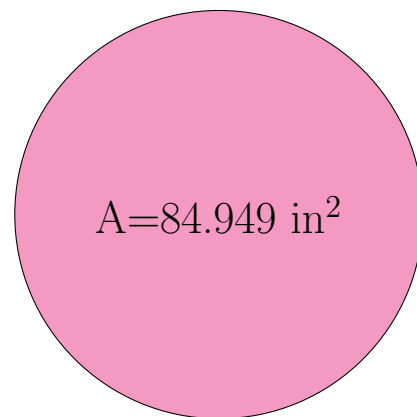
radio = _____
diámetro = _____



radio = _____
diámetro = _____



radio = _____
diámetro = _____



radio = _____
diámetro = _____