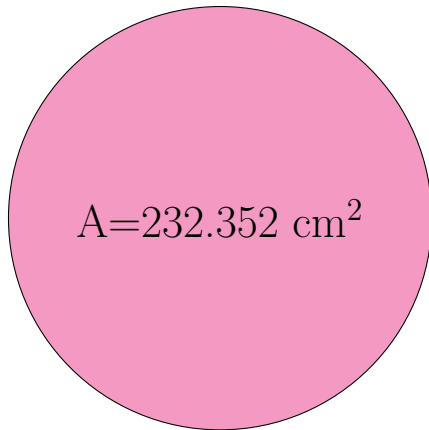
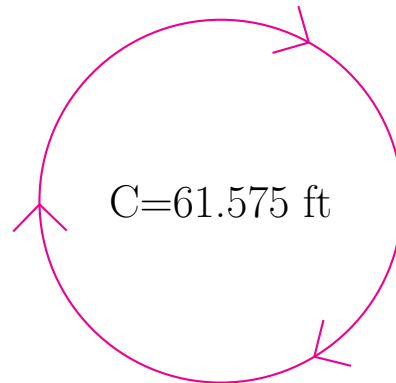


Radio y Diámetro de Círculos (E)

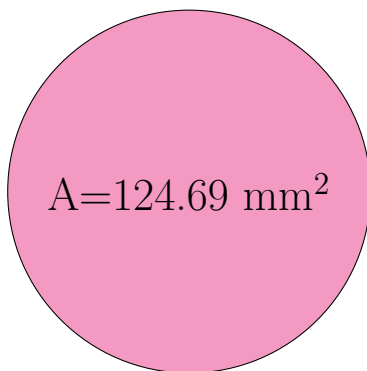
Calcule el radio y el diámetro de cada círculo.



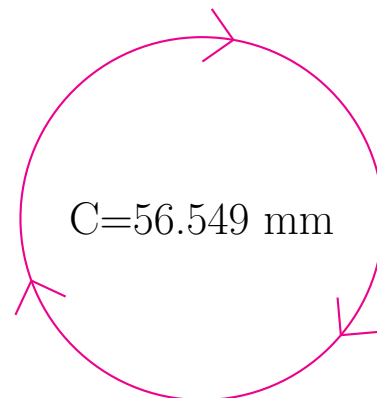
radio = _____
diámetro = _____



radio = _____
diámetro = _____



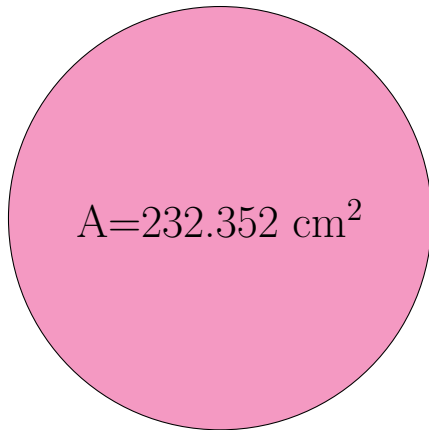
radio = _____
diámetro = _____



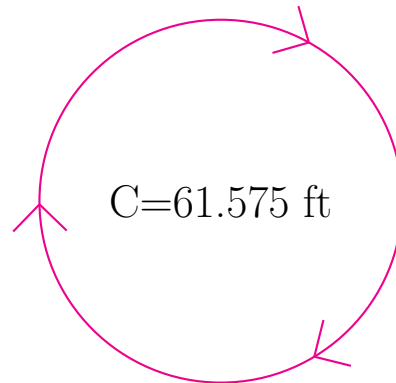
radio = _____
diámetro = _____

Radio y Diámetro de Círculos (E) Respuestas

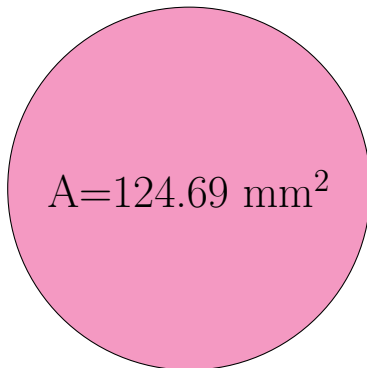
Calcule el radio y el diámetro de cada círculo.



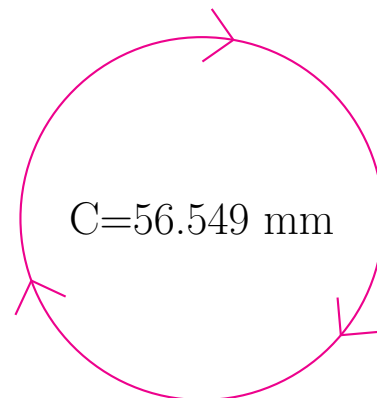
$$\begin{aligned} \text{radio} &= \underline{8.6 \text{ cm}} \\ \text{diámetro} &= \underline{17.2 \text{ cm}} \end{aligned}$$



$$\begin{aligned} \text{radio} &= \underline{9.8 \text{ ft}} \\ \text{diámetro} &= \underline{19.6 \text{ ft}} \end{aligned}$$



$$\begin{aligned} \text{radio} &= \underline{6.3 \text{ mm}} \\ \text{diámetro} &= \underline{12.6 \text{ mm}} \end{aligned}$$



$$\begin{aligned} \text{radio} &= \underline{9.0 \text{ mm}} \\ \text{diámetro} &= \underline{18.0 \text{ mm}} \end{aligned}$$