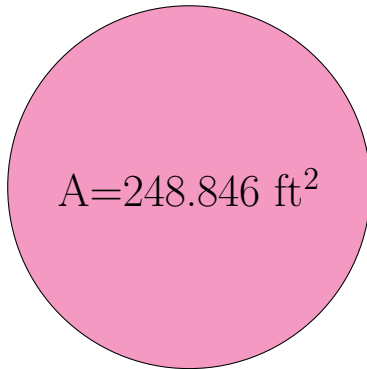
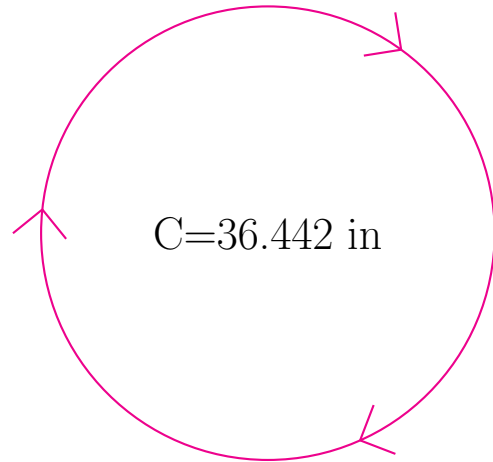


Radio y Diámetro de Círculos (F)

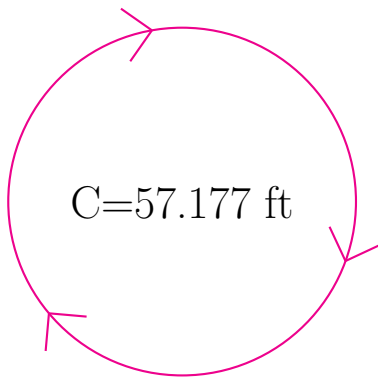
Calcule el radio y el diámetro de cada círculo.



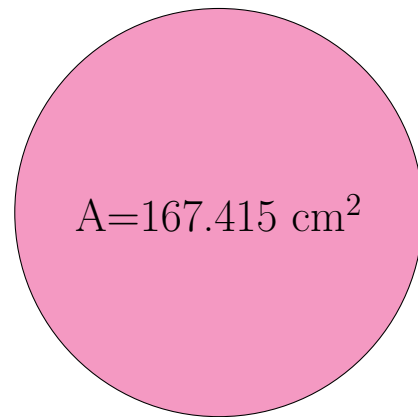
radio = _____
diámetro = _____



radio = _____
diámetro = _____



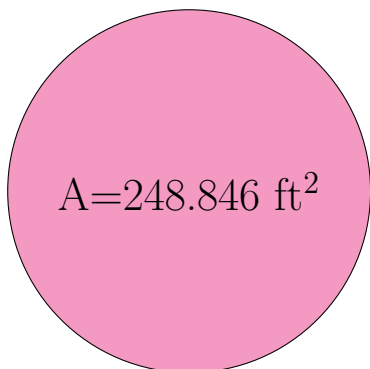
radio = _____
diámetro = _____



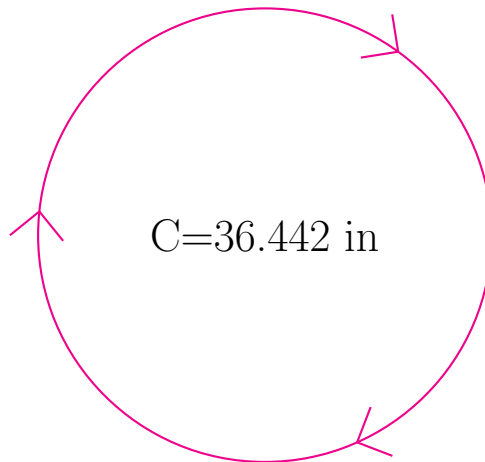
radio = _____
diámetro = _____

Radio y Diámetro de Círculos (F) Respuestas

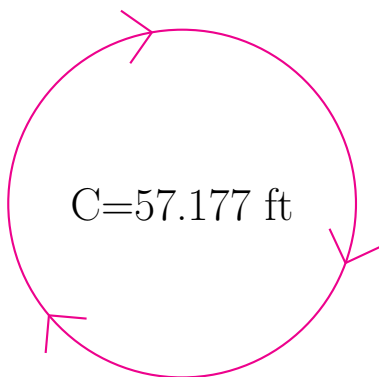
Calcule el radio y el diámetro de cada círculo.



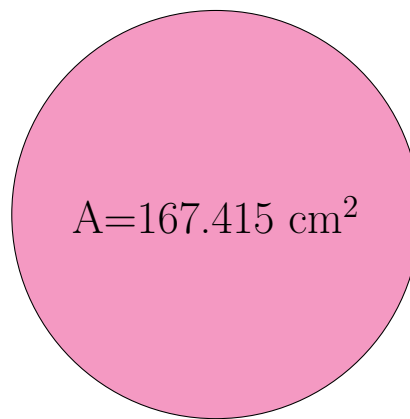
$$\begin{aligned} \text{radio} &= \underline{8.9 \text{ ft}} \\ \text{diámetro} &= \underline{17.8 \text{ ft}} \end{aligned}$$



$$\begin{aligned} \text{radio} &= \underline{5.8 \text{ in}} \\ \text{diámetro} &= \underline{11.6 \text{ in}} \end{aligned}$$



$$\begin{aligned} \text{radio} &= \underline{9.1 \text{ ft}} \\ \text{diámetro} &= \underline{18.2 \text{ ft}} \end{aligned}$$



$$\begin{aligned} \text{radio} &= \underline{7.3 \text{ cm}} \\ \text{diámetro} &= \underline{14.6 \text{ cm}} \end{aligned}$$