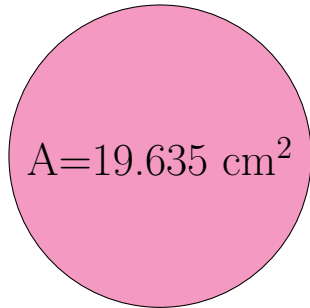
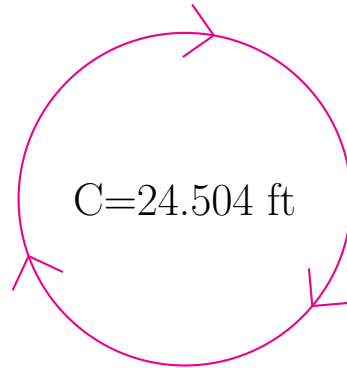


Radio y Diámetro de Círculos (H)

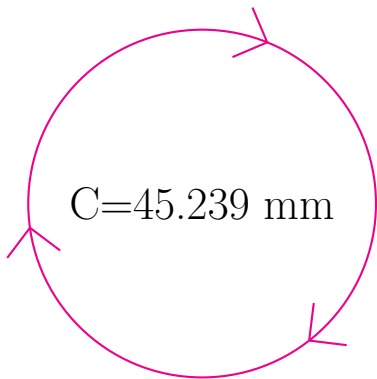
Calcule el radio y el diámetro de cada círculo.



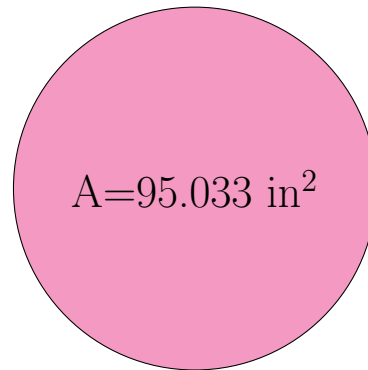
radio = _____
diámetro = _____



radio = _____
diámetro = _____



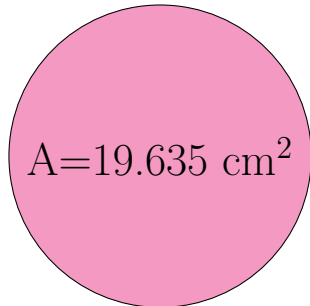
radio = _____
diámetro = _____



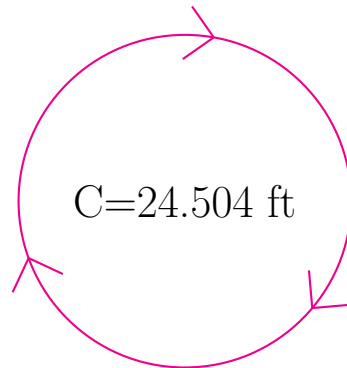
radio = _____
diámetro = _____

Radio y Diámetro de Círculos (H) Respuestas

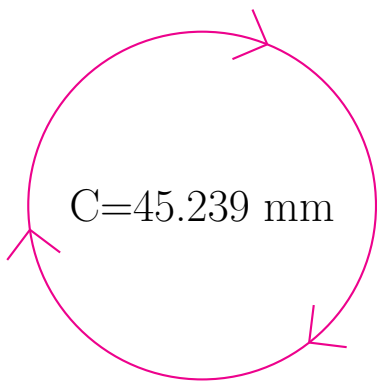
Calcule el radio y el diámetro de cada círculo.



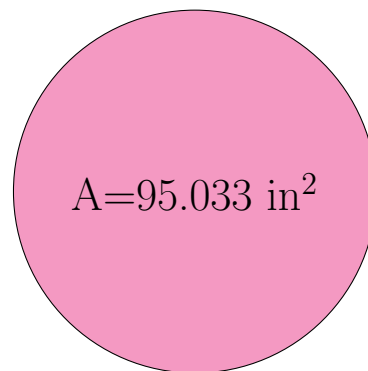
radio = 2.5 cm
diámetro = 5.0 cm



radio = 3.9 ft
diámetro = 7.8 ft



radio = 7.2 mm
diámetro = 14.4 mm



radio = 5.5 in
diámetro = 11.0 in