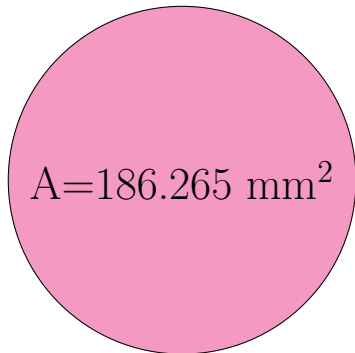
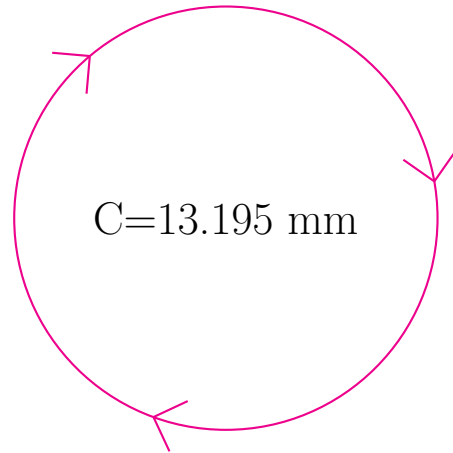


Radio y Diámetro de Círculos (J)

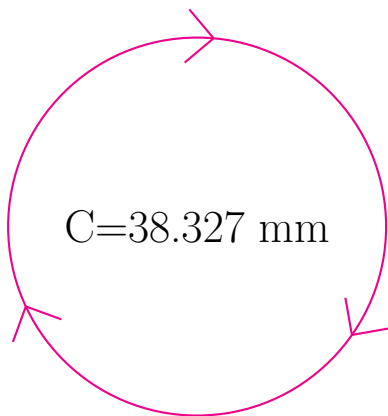
Calcule el radio y el diámetro de cada círculo.



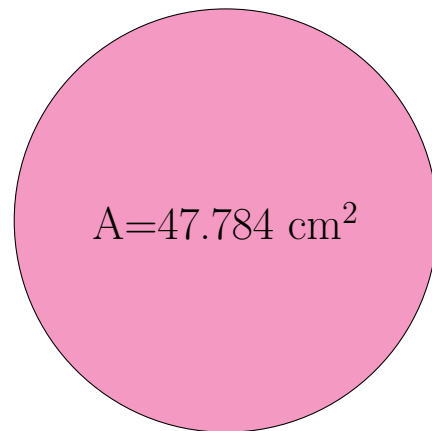
radio = _____
diámetro = _____



radio = _____
diámetro = _____



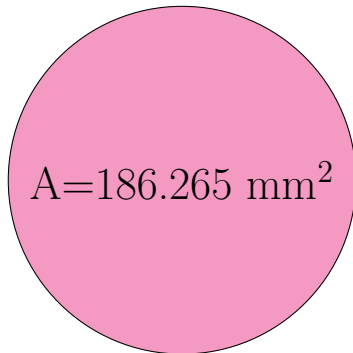
radio = _____
diámetro = _____



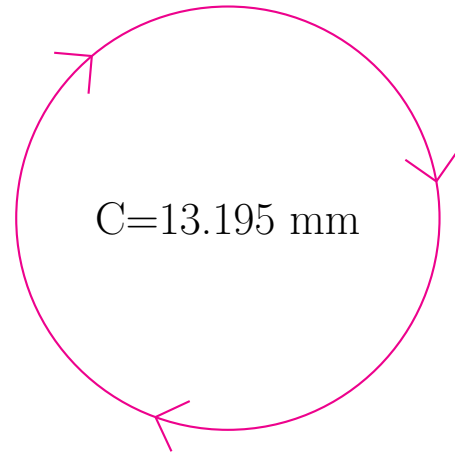
radio = _____
diámetro = _____

Radio y Diámetro de Círculos (J) Respuestas

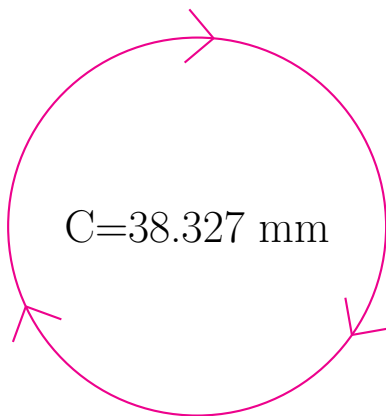
Calcule el radio y el diámetro de cada círculo.



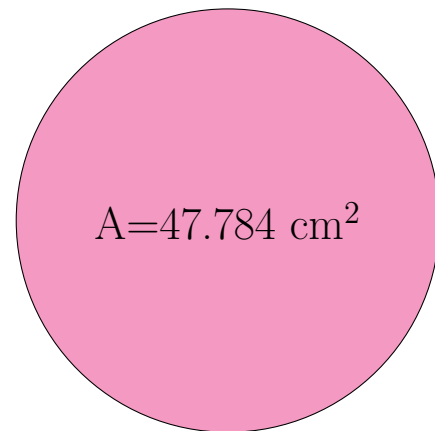
$$\begin{aligned} \text{radio} &= \underline{7.7 \text{ mm}} \\ \text{diámetro} &= \underline{15.4 \text{ mm}} \end{aligned}$$



$$\begin{aligned} \text{radio} &= \underline{2.1 \text{ mm}} \\ \text{diámetro} &= \underline{4.2 \text{ mm}} \end{aligned}$$



$$\begin{aligned} \text{radio} &= \underline{6.1 \text{ mm}} \\ \text{diámetro} &= \underline{12.2 \text{ mm}} \end{aligned}$$



$$\begin{aligned} \text{radio} &= \underline{3.9 \text{ cm}} \\ \text{diámetro} &= \underline{7.8 \text{ cm}} \end{aligned}$$