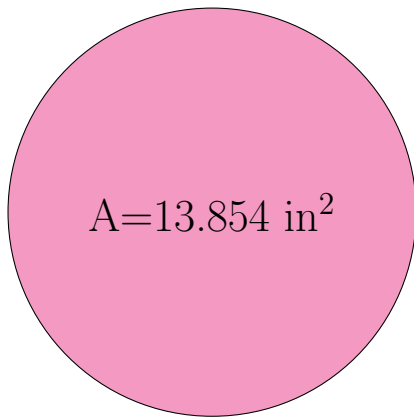
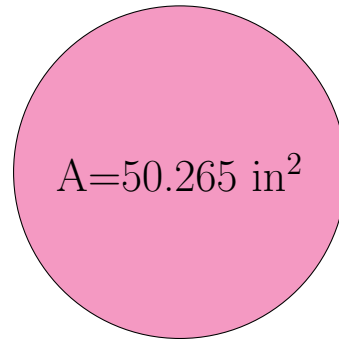


Radio y Diámetro de Círculos (G)

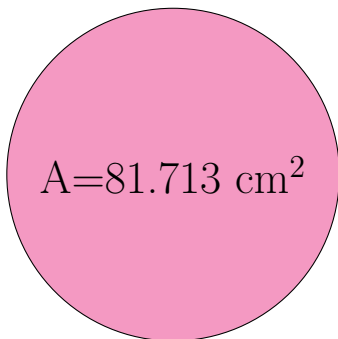
Calcule el radio y el diámetro de cada círculo.



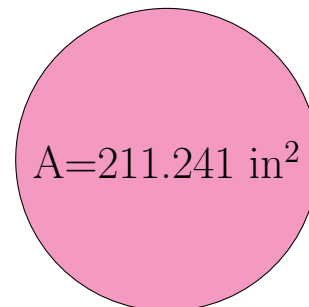
radio = _____
diámetro = _____



radio = _____
diámetro = _____



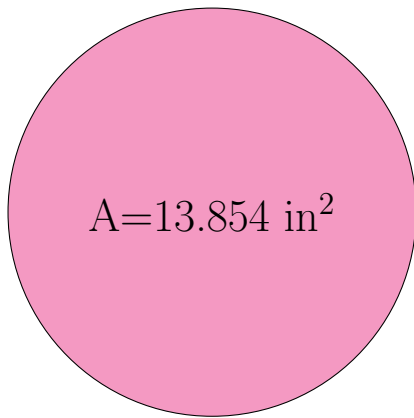
radio = _____
diámetro = _____



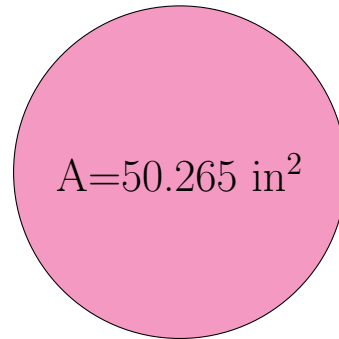
radio = _____
diámetro = _____

Radio y Diámetro de Círculos (G) Respuestas

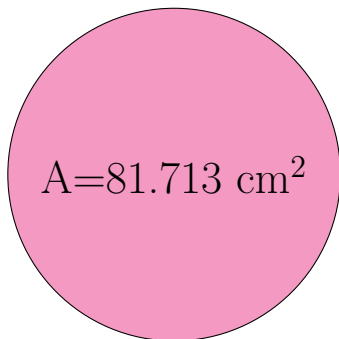
Calcule el radio y el diámetro de cada círculo.



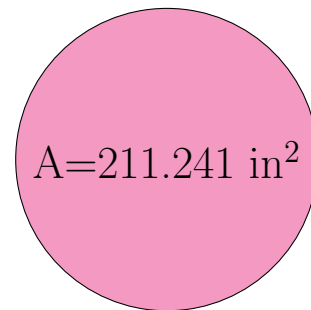
$$\begin{aligned} \text{radio} &= \underline{2.1 \text{ in}} \\ \text{diámetro} &= \underline{4.2 \text{ in}} \end{aligned}$$



$$\begin{aligned} \text{radio} &= \underline{4.0 \text{ in}} \\ \text{diámetro} &= \underline{8.0 \text{ in}} \end{aligned}$$



$$\begin{aligned} \text{radio} &= \underline{5.1 \text{ cm}} \\ \text{diámetro} &= \underline{10.2 \text{ cm}} \end{aligned}$$



$$\begin{aligned} \text{radio} &= \underline{8.2 \text{ in}} \\ \text{diámetro} &= \underline{16.4 \text{ in}} \end{aligned}$$