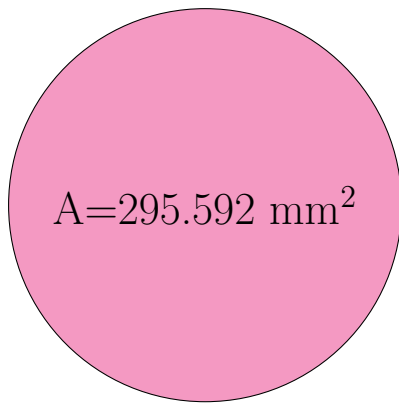
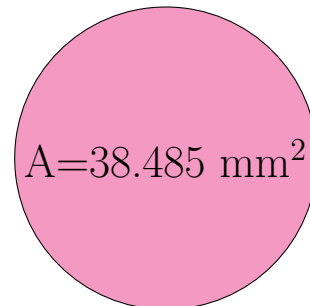


Radio y Diámetro de Círculos (H)

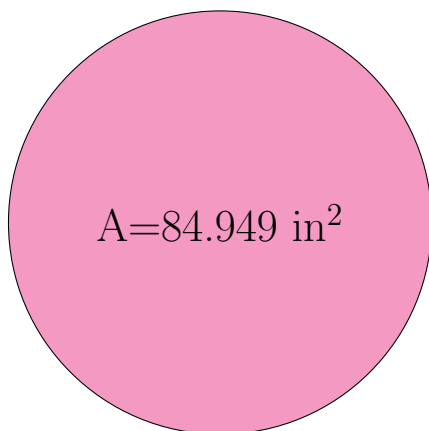
Calcule el radio y el diámetro de cada círculo.



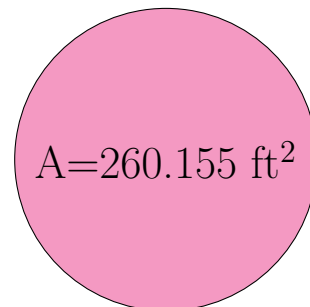
radio = _____
diámetro = _____



radio = _____
diámetro = _____



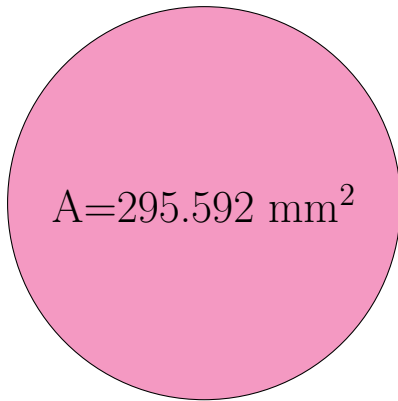
radio = _____
diámetro = _____



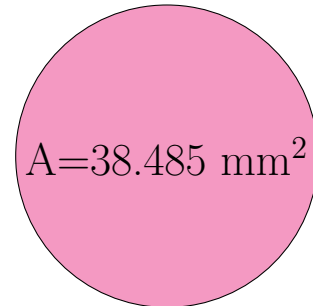
radio = _____
diámetro = _____

Radio y Diámetro de Círculos (H) Respuestas

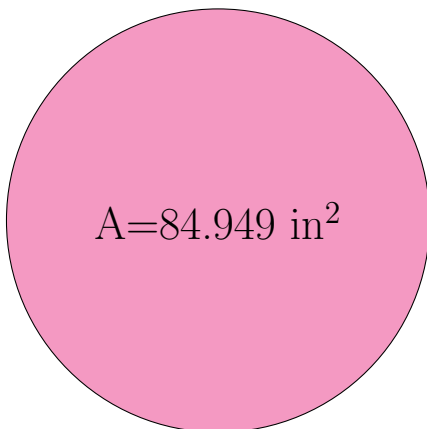
Calcule el radio y el diámetro de cada círculo.



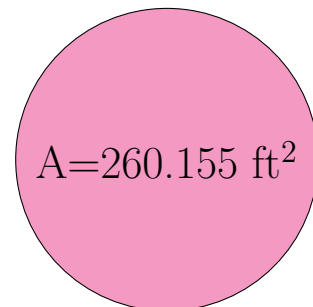
$$\begin{aligned} \text{radio} &= \underline{9.7 \text{ mm}} \\ \text{diámetro} &= \underline{19.4 \text{ mm}} \end{aligned}$$



$$\begin{aligned} \text{radio} &= \underline{3.5 \text{ mm}} \\ \text{diámetro} &= \underline{7.0 \text{ mm}} \end{aligned}$$



$$\begin{aligned} \text{radio} &= \underline{5.2 \text{ in}} \\ \text{diámetro} &= \underline{10.4 \text{ in}} \end{aligned}$$



$$\begin{aligned} \text{radio} &= \underline{9.1 \text{ ft}} \\ \text{diámetro} &= \underline{18.2 \text{ ft}} \end{aligned}$$