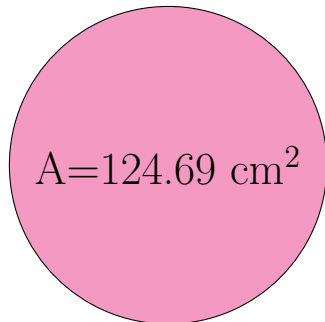
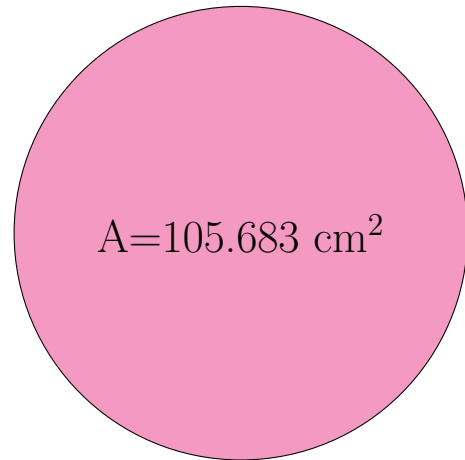


## Radio y Diámetro de Círculos (J)

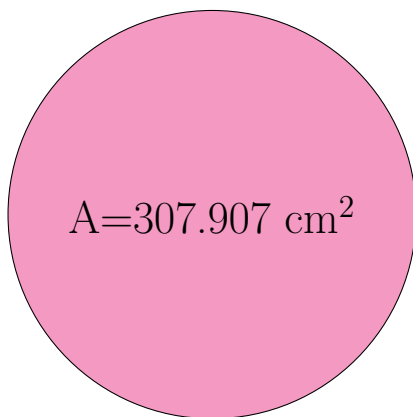
Calcule el radio y el diámetro de cada círculo.



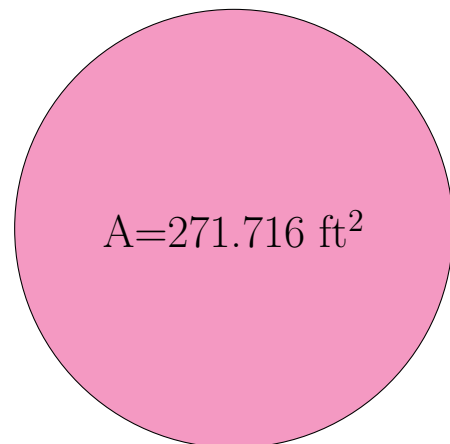
radio = \_\_\_\_\_  
diámetro = \_\_\_\_\_



radio = \_\_\_\_\_  
diámetro = \_\_\_\_\_



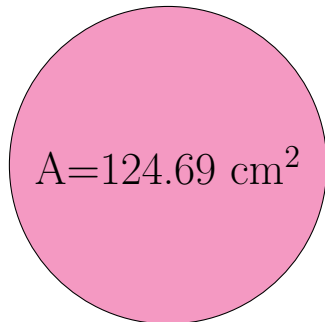
radio = \_\_\_\_\_  
diámetro = \_\_\_\_\_



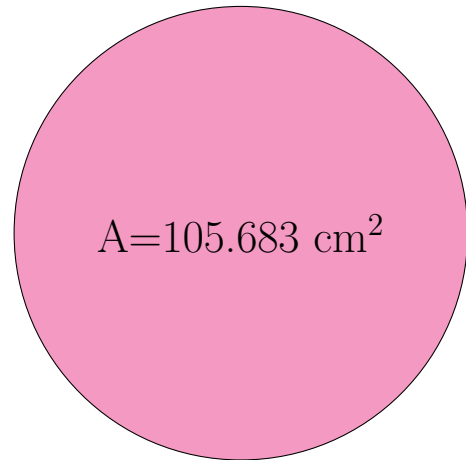
radio = \_\_\_\_\_  
diámetro = \_\_\_\_\_

## Radio y Diámetro de Círculos (J) Respuestas

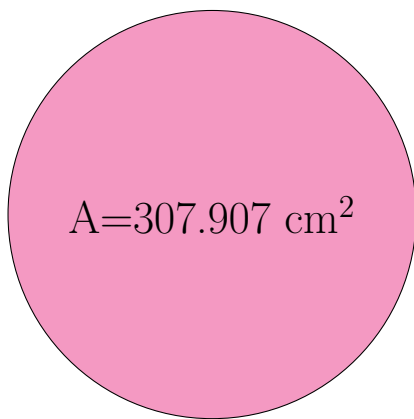
Calcule el radio y el diámetro de cada círculo.



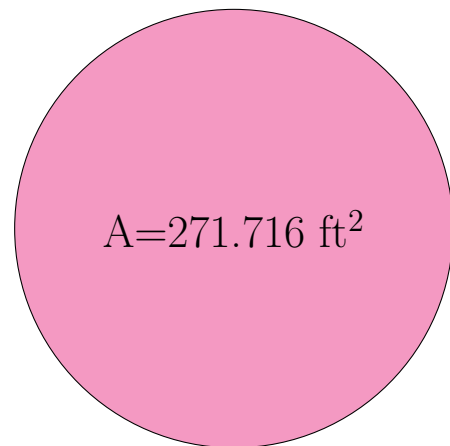
$$\begin{aligned} \text{radio} &= \underline{6.3 \text{ cm}} \\ \text{diámetro} &= \underline{12.6 \text{ cm}} \end{aligned}$$



$$\begin{aligned} \text{radio} &= \underline{5.8 \text{ cm}} \\ \text{diámetro} &= \underline{11.6 \text{ cm}} \end{aligned}$$



$$\begin{aligned} \text{radio} &= \underline{9.9 \text{ cm}} \\ \text{diámetro} &= \underline{19.8 \text{ cm}} \end{aligned}$$



$$\begin{aligned} \text{radio} &= \underline{9.3 \text{ ft}} \\ \text{diámetro} &= \underline{18.6 \text{ ft}} \end{aligned}$$