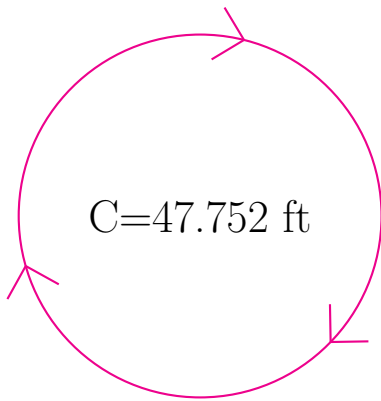


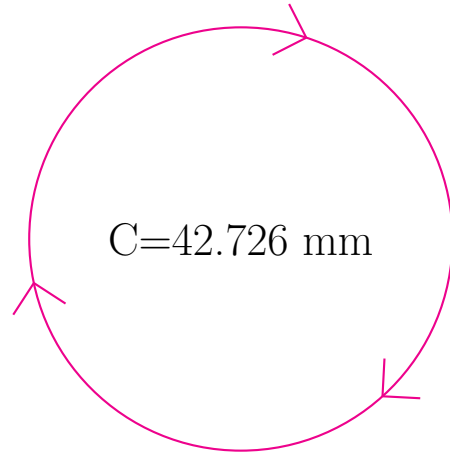
Radio y Diámetro de Círculos (I)

Calcule el radio y el diámetro de cada círculo.



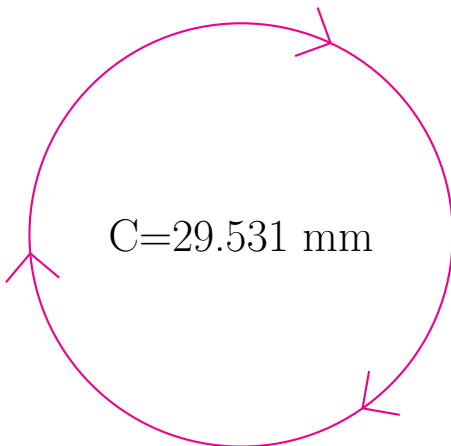
radio = _____

diámetro = _____



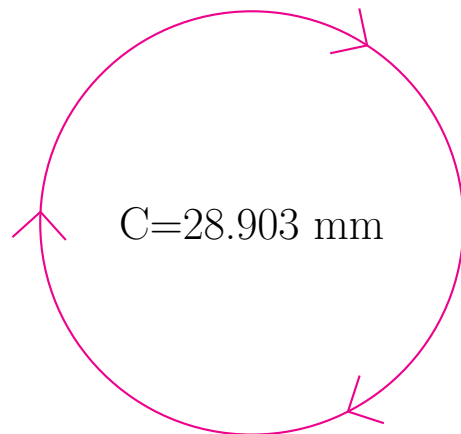
radio = _____

diámetro = _____



radio = _____

diámetro = _____

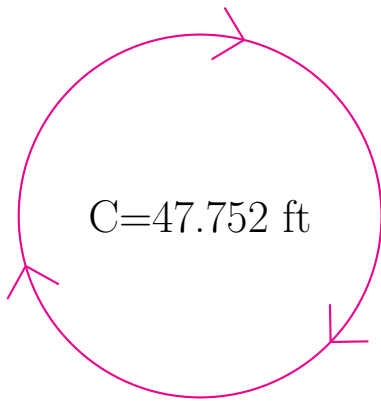


radio = _____

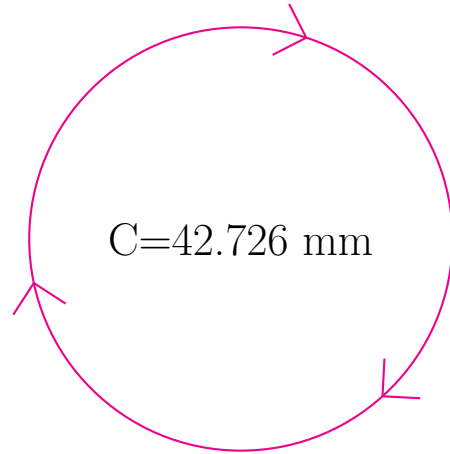
diámetro = _____

Radio y Diámetro de Círculos (I) Respuestas

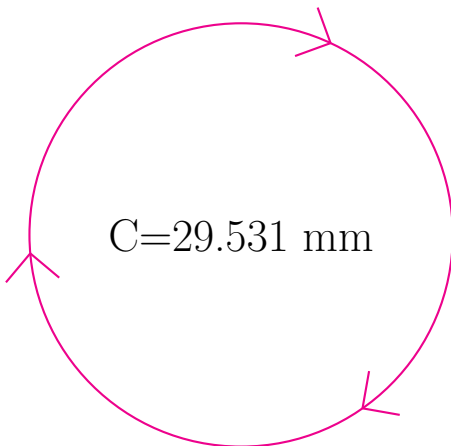
Calcule el radio y el diámetro de cada círculo.



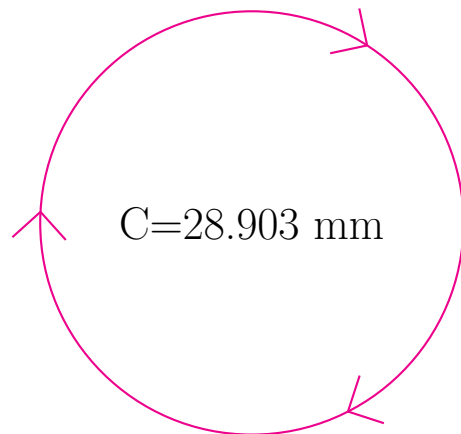
$$\begin{aligned} \text{radio} &= \underline{7.6 \text{ ft}} \\ \text{diámetro} &= \underline{15.2 \text{ ft}} \end{aligned}$$



$$\begin{aligned} \text{radio} &= \underline{6.8 \text{ mm}} \\ \text{diámetro} &= \underline{13.6 \text{ mm}} \end{aligned}$$



$$\begin{aligned} \text{radio} &= \underline{4.7 \text{ mm}} \\ \text{diámetro} &= \underline{9.4 \text{ mm}} \end{aligned}$$



$$\begin{aligned} \text{radio} &= \underline{4.6 \text{ mm}} \\ \text{diámetro} &= \underline{9.2 \text{ mm}} \end{aligned}$$