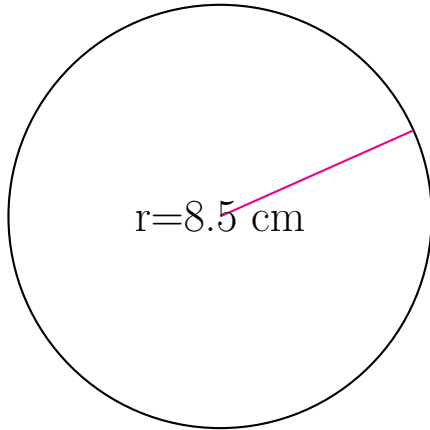
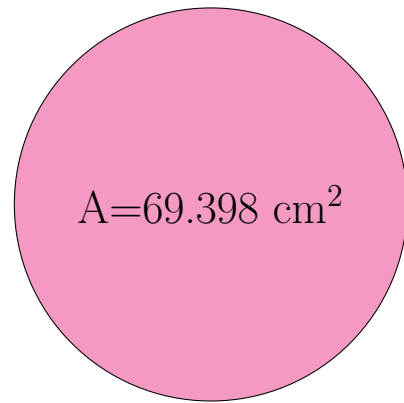


Medidas de Círculos (C)

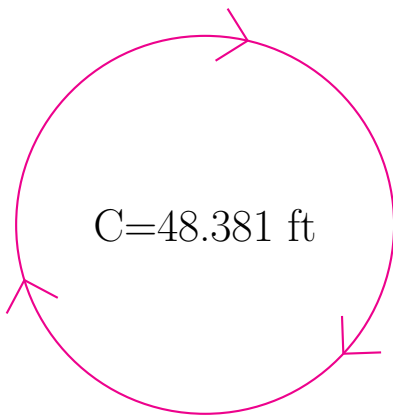
Calcule las medidas de cada círculo usando las medidas dadas.



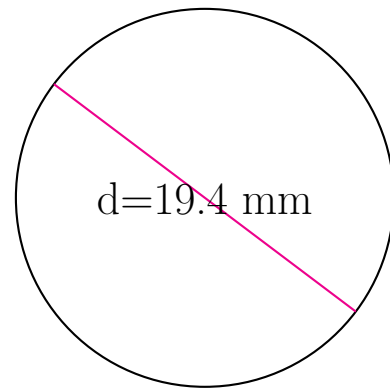
radio = 8.5 cm
diámetro = _____
circunferencia = _____
área = _____



radio = _____
diámetro = _____
circunferencia = _____
área = 69.398 cm²



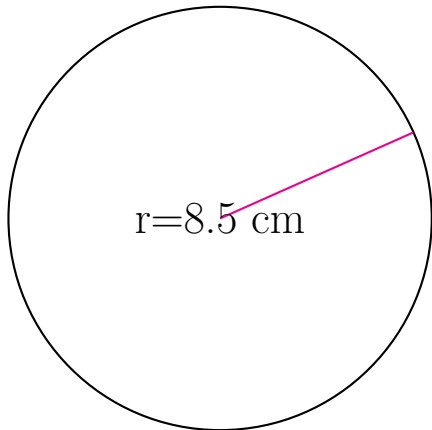
radio = _____
diámetro = _____
circunferencia = 48.381 ft
área = _____



radio = _____
diámetro = 19.4 mm
circunferencia = _____
área = _____

Medidas de Círculos (C) Respuestas

Calcule las medidas de cada círculo usando las medidas dadas.

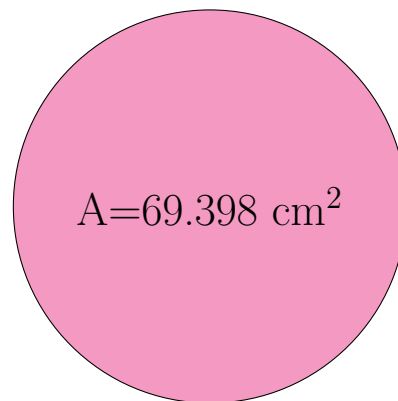


radio = 8.5 cm

diámetro = 17.0 cm

circunferencia = 53.407 cm

área = 226.98 cm²

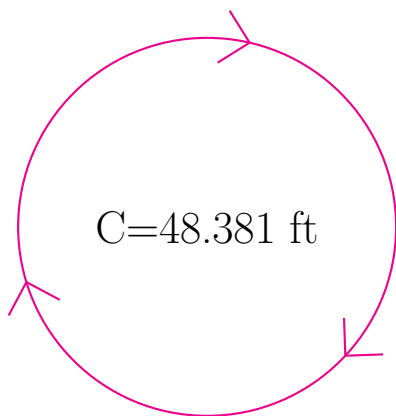


radio = 4.7 cm

diámetro = 9.4 cm

circunferencia = 29.531 cm

área = 69.398 cm²

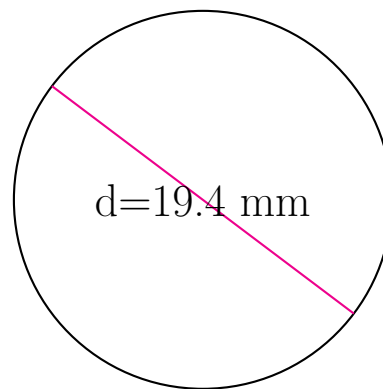


radio = 7.7 ft

diámetro = 15.4 ft

circunferencia = 48.381 ft

área = 186.265 ft²



radio = 9.7 mm

diámetro = 19.4 mm

circunferencia = 60.947 mm

área = 295.592 mm²