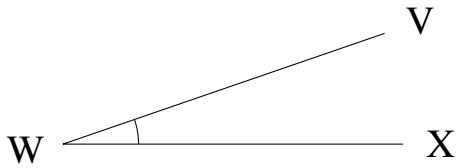


Medir Ángulos (C)

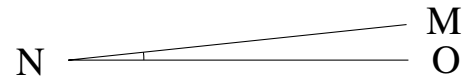
Estime y mida cada ángulo.

1.



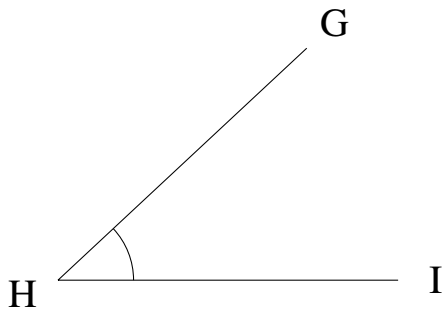
$$m\angle VWX =$$

2.



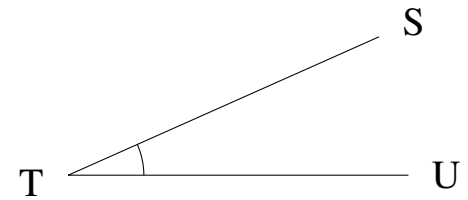
$$m\angle MNO =$$

3.



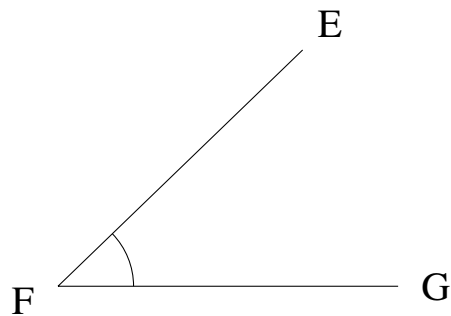
$$m\angle GHI =$$

4.



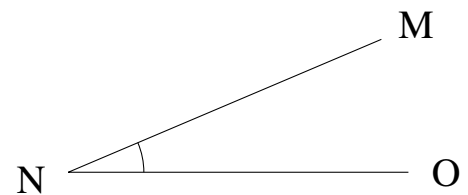
$$m\angle STU =$$

5.



$$m\angle EFG =$$

6.

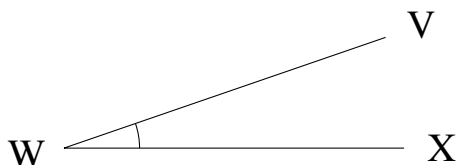


$$m\angle MNO =$$

Medir Ángulos (C) Respuestas

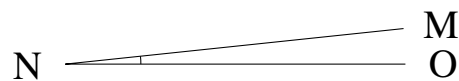
Estime y mida cada ángulo.

1.



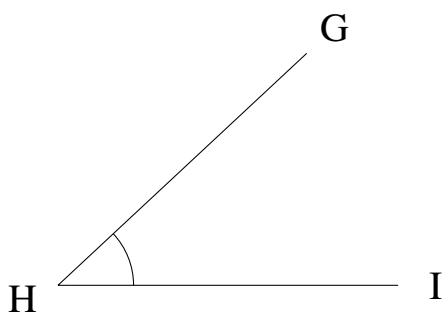
$$m\angle VWX = 19^\circ$$

2.



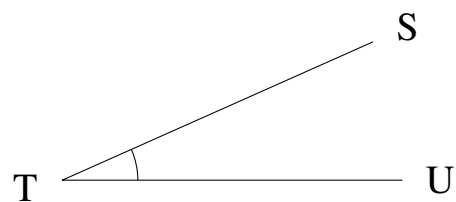
$$m\angle MNO = 6^\circ$$

3.



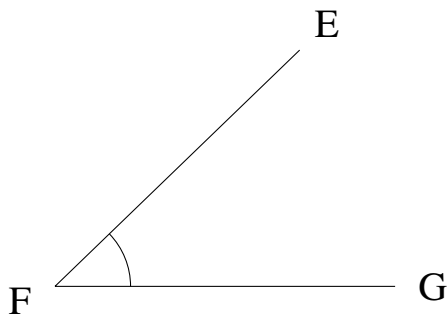
$$m\angle GHI = 43^\circ$$

4.



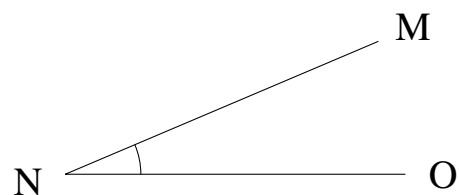
$$m\angle STU = 24^\circ$$

5.



$$m\angle EFG = 44^\circ$$

6.



$$m\angle MNO = 23^\circ$$