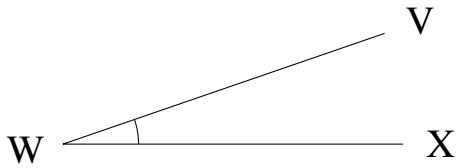


Medir Ángulos (C)

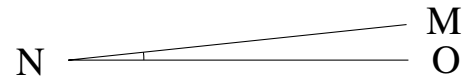
Estime y mida cada ángulo.

1.



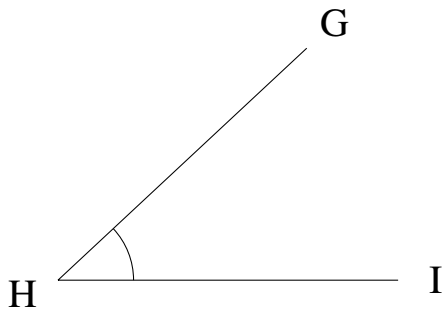
$$m\angle VWX =$$

2.



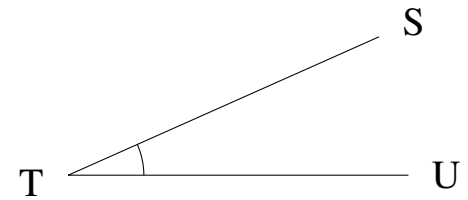
$$m\angle MNO =$$

3.



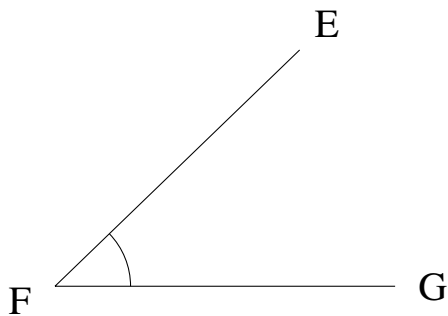
$$m\angle GHI =$$

4.



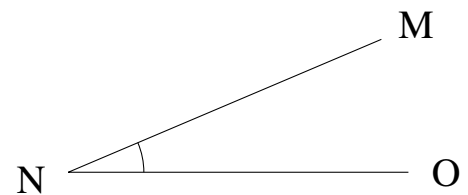
$$m\angle STU =$$

5.



$$m\angle EFG =$$

6.



$$m\angle MNO =$$