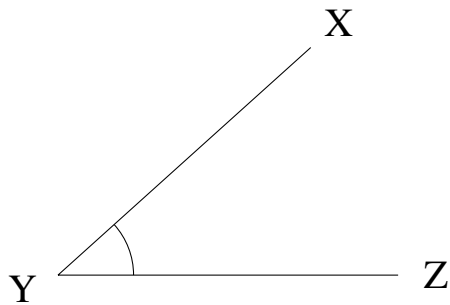


Medir Ángulos (D)

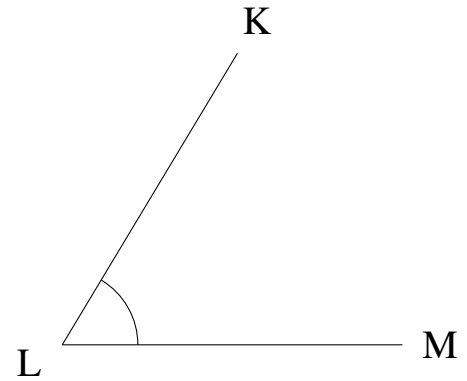
Estime y mida cada ángulo.

1.



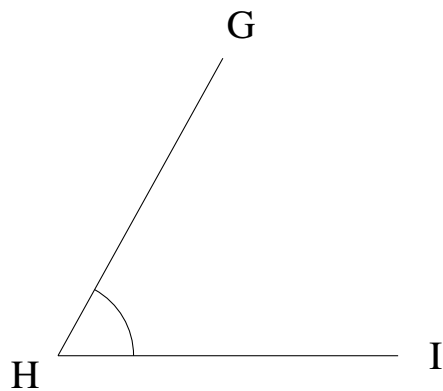
$$m\angle XYZ =$$

2.



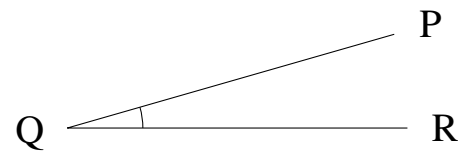
$$m\angle KLM =$$

3.



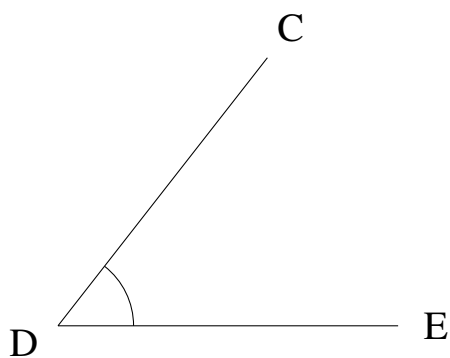
$$m\angle GHI =$$

4.



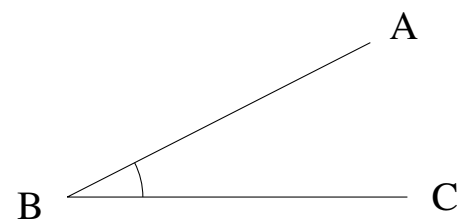
$$m\angle PQR =$$

5.



$$m\angle CDE =$$

6.

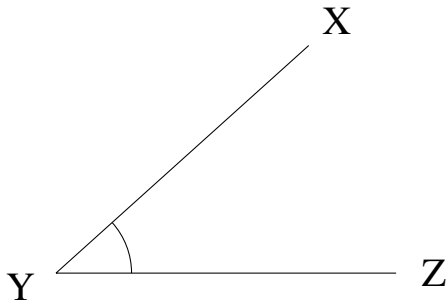


$$m\angle ABC =$$

Medir Ángulos (D) Respuestas

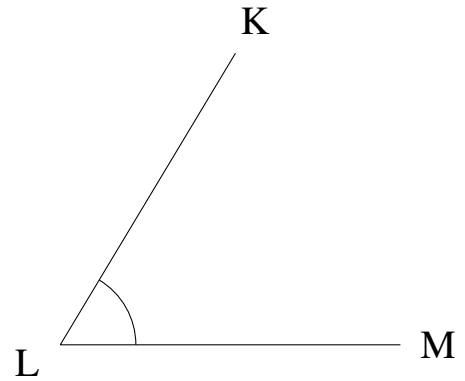
Estime y mida cada ángulo.

1.



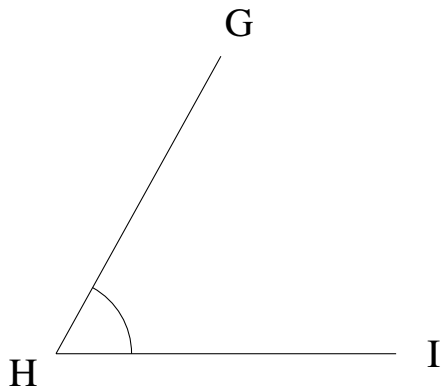
$$m\angle XYZ = 42^\circ$$

2.



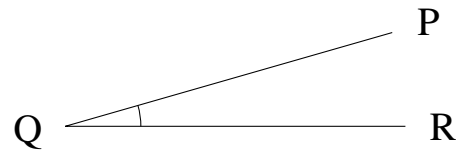
$$m\angle KLM = 59^\circ$$

3.



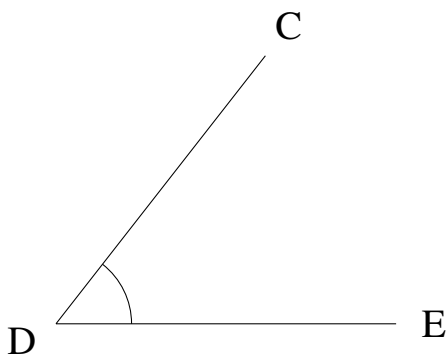
$$m\angle GHI = 61^\circ$$

4.



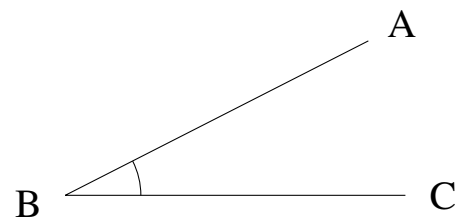
$$m\angle PQR = 16^\circ$$

5.



$$m\angle CDE = 52^\circ$$

6.



$$m\angle ABC = 27^\circ$$