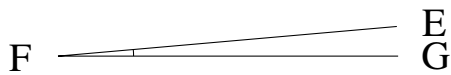


Medir Ángulos (G)

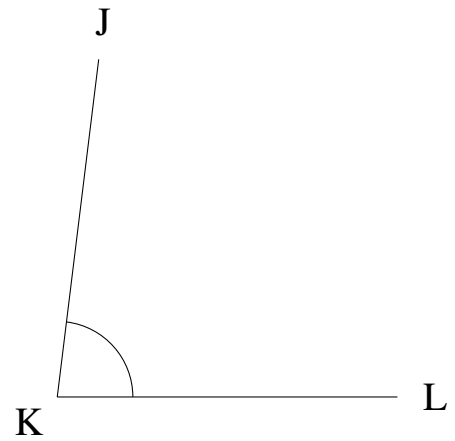
Estime y mida cada ángulo.

1.



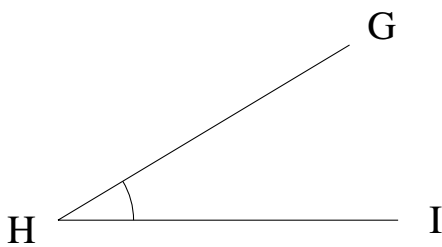
$$m\angle EFG =$$

2.



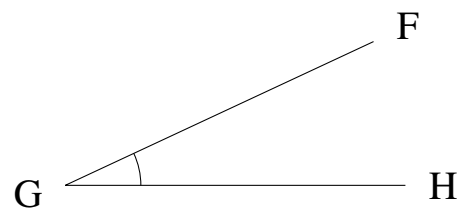
$$m\angle JKL =$$

3.



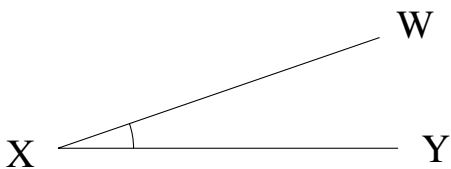
$$m\angle GHI =$$

4.



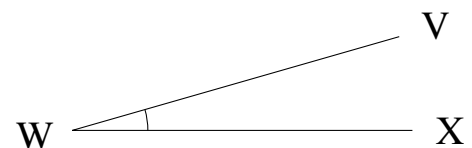
$$m\angle FGH =$$

5.



$$m\angle WXY =$$

6.



$$m\angle VWX =$$

Medir Ángulos (G) Respuestas

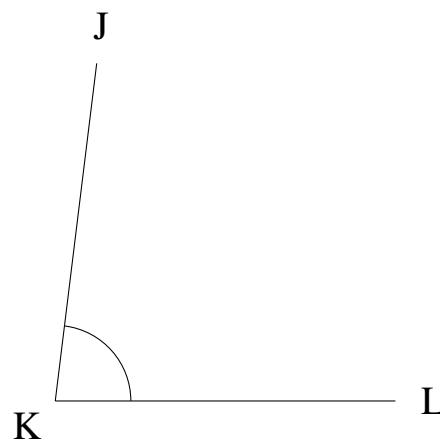
Estime y mida cada ángulo.

1.



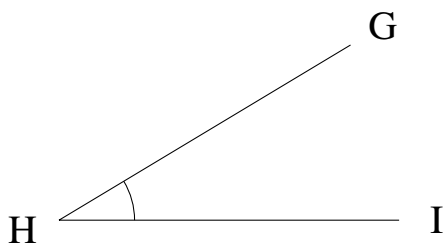
$$m\angle EFG = 5^\circ$$

2.



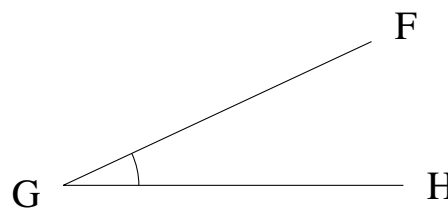
$$m\angle JKL = 83^\circ$$

3.



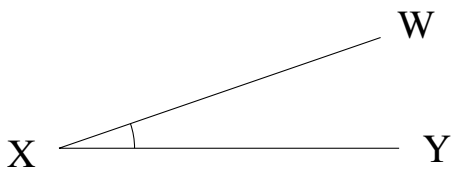
$$m\angle GHI = 31^\circ$$

4.



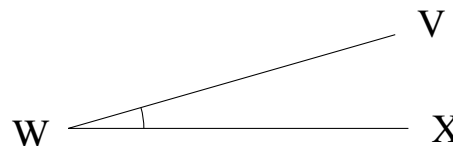
$$m\angle FGH = 25^\circ$$

5.



$$m\angle WXY = 19^\circ$$

6.



$$m\angle VWX = 16^\circ$$