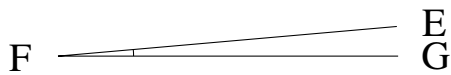


Medir Ángulos (G)

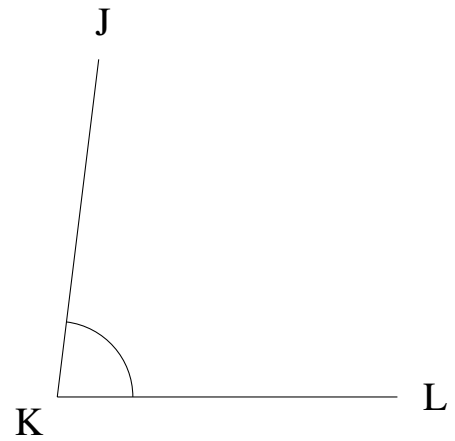
Estime y mida cada ángulo.

1.



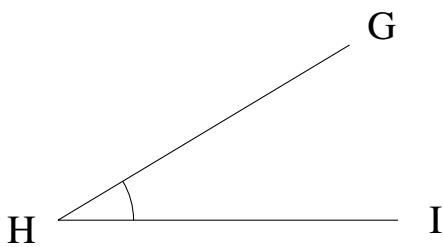
$$m\angle EFG =$$

2.



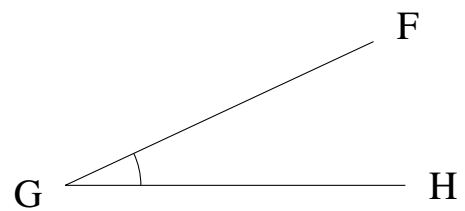
$$m\angle JKL =$$

3.



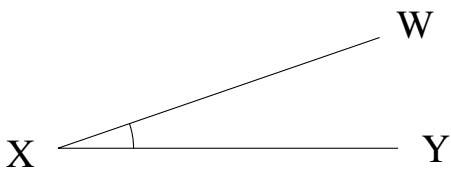
$$m\angle GHI =$$

4.



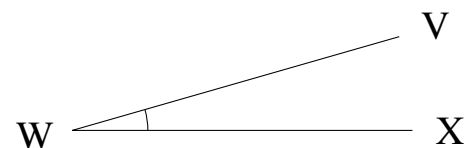
$$m\angle FGH =$$

5.



$$m\angle WXY =$$

6.



$$m\angle VWX =$$