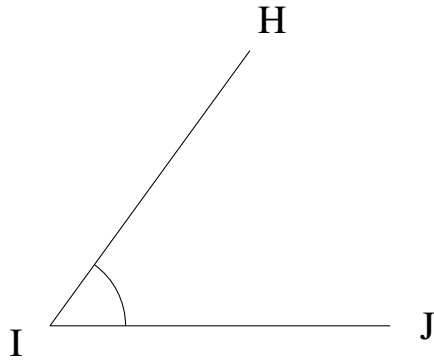


Medir Ángulos (H)

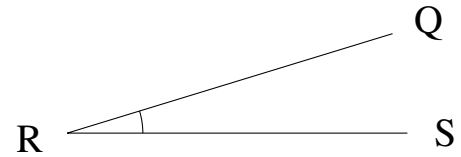
Estime y mida cada ángulo.

1.



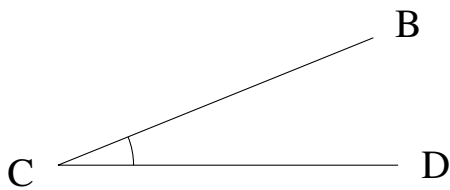
$$m\angle HIJ =$$

2.



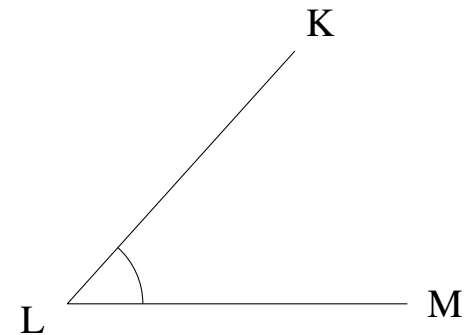
$$m\angle QRS =$$

3.



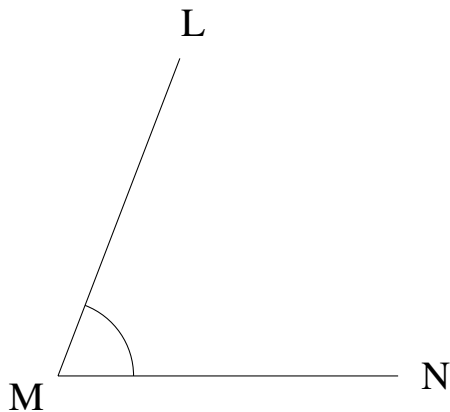
$$m\angle BCD =$$

4.



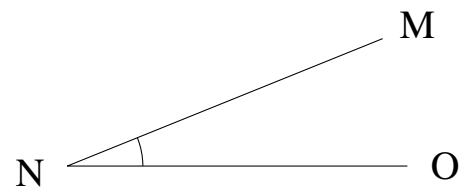
$$m\angle KLM =$$

5.



$$m\angle LMN =$$

6.

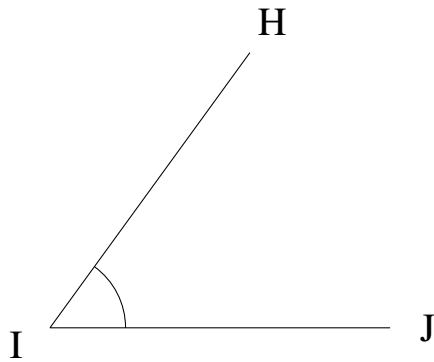


$$m\angle MNO =$$

Medir Ángulos (H) Respuestas

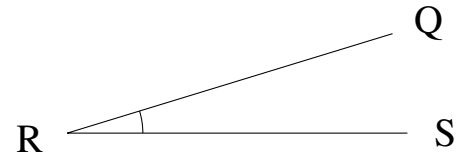
Estime y mida cada ángulo.

1.



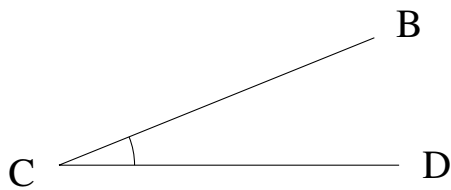
$$m\angle HIJ = 54^\circ$$

2.



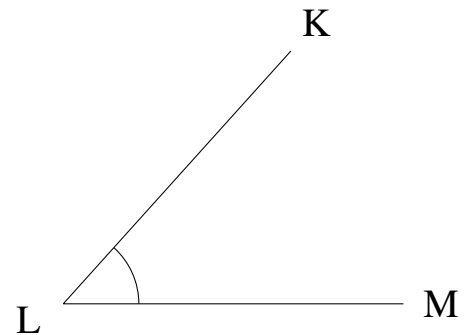
$$m\angle QRS = 17^\circ$$

3.



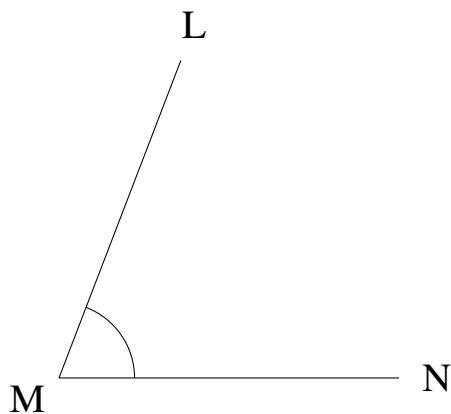
$$m\angle BCD = 22^\circ$$

4.



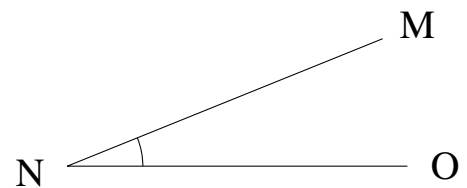
$$m\angle KLM = 48^\circ$$

5.



$$m\angle LMN = 69^\circ$$

6.



$$m\angle MNO = 22^\circ$$