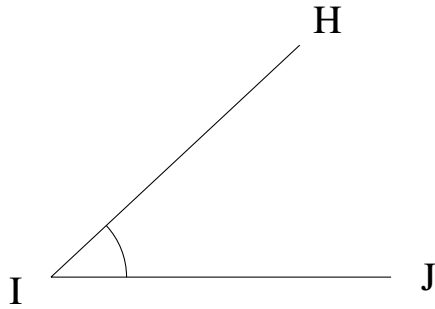


Medir Ángulos (I)

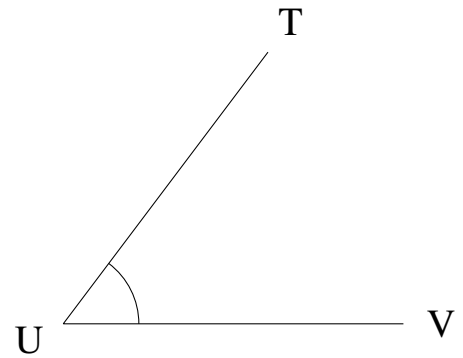
Estime y mida cada ángulo.

1.



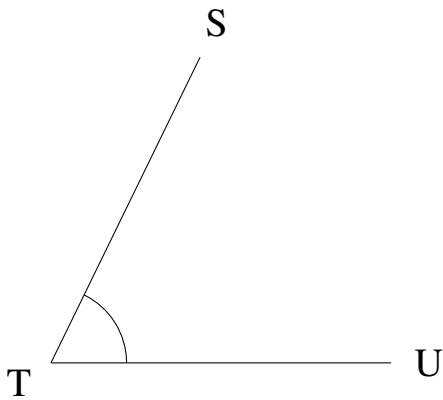
$$m\angle HIJ =$$

2.



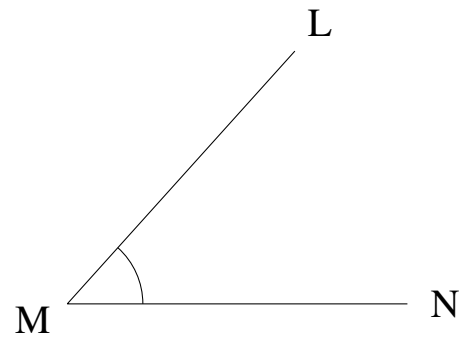
$$m\angle TUV =$$

3.



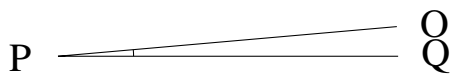
$$m\angle STU =$$

4.



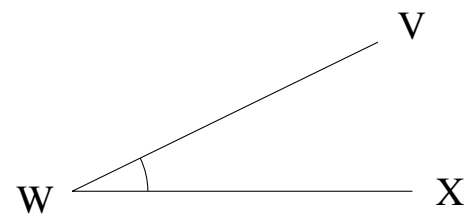
$$m\angle LMN =$$

5.



$$m\angle OPQ =$$

6.

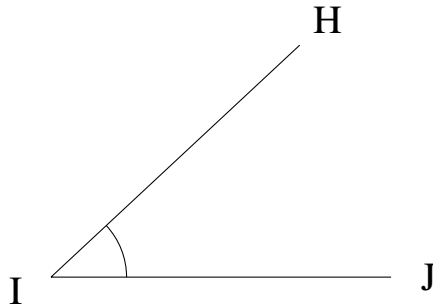


$$m\angle VWX =$$

Medir Ángulos (I) Respuestas

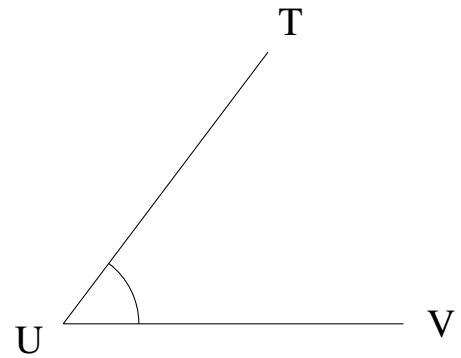
Estime y mida cada ángulo.

1.



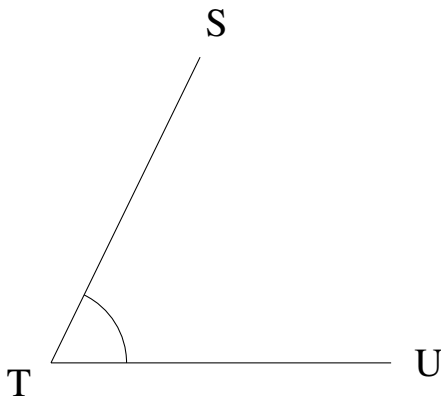
$$m\angle HIJ = 43^\circ$$

2.



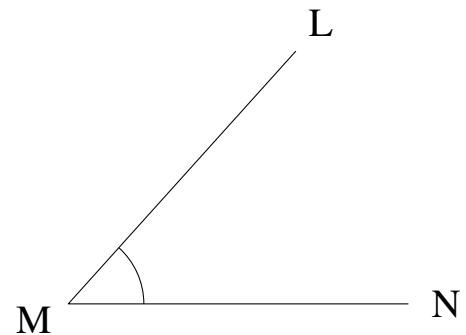
$$m\angle TUV = 53^\circ$$

3.



$$m\angle STU = 64^\circ$$

4.



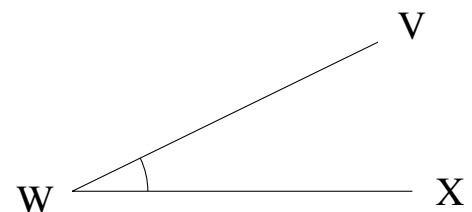
$$m\angle LMN = 48^\circ$$

5.



$$m\angle OPQ = 5^\circ$$

6.



$$m\angle VWX = 26^\circ$$