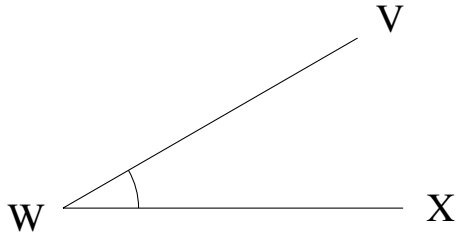


Medir Ángulos (J)

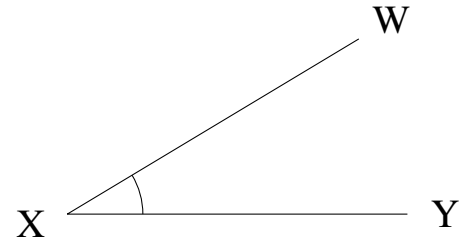
Estime y mida cada ángulo.

1.



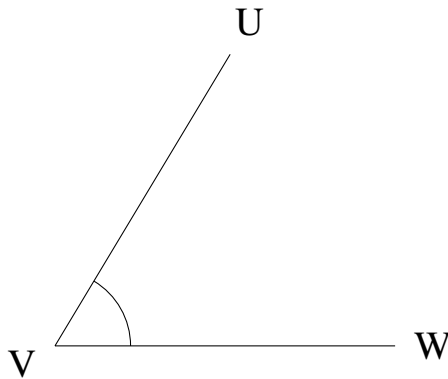
$$m\angle VWX =$$

2.



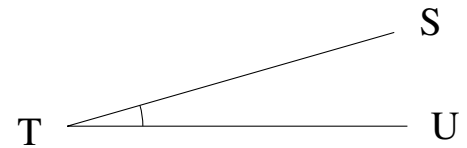
$$m\angle WXY =$$

3.



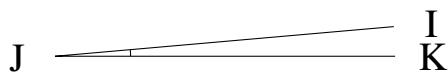
$$m\angle UVW =$$

4.



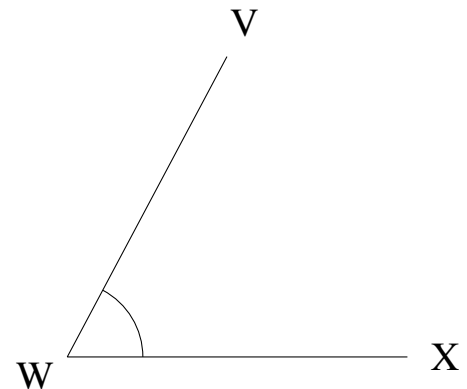
$$m\angle STU =$$

5.



$$m\angle IJK =$$

6.

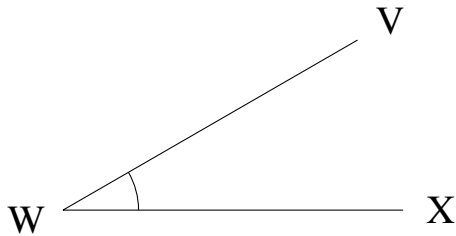


$$m\angle VWX =$$

Medir Ángulos (J) Respuestas

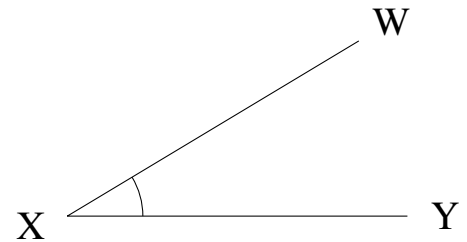
Estime y mida cada ángulo.

1.



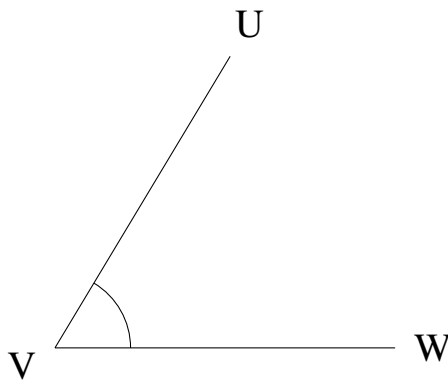
$$m\angle VWX = 30^\circ$$

2.



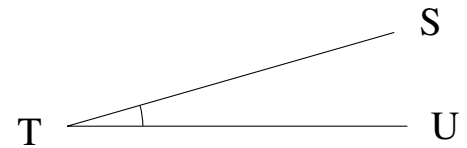
$$m\angle WXY = 31^\circ$$

3.



$$m\angle UVW = 59^\circ$$

4.



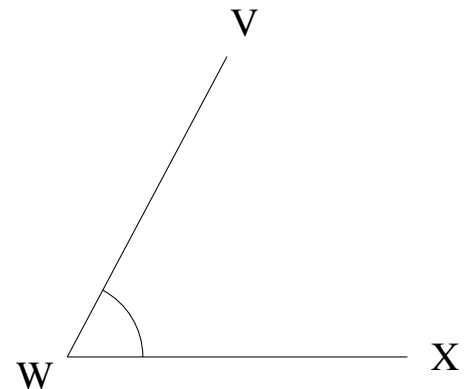
$$m\angle STU = 16^\circ$$

5.



$$m\angle IJK = 5^\circ$$

6.



$$m\angle VWX = 62^\circ$$