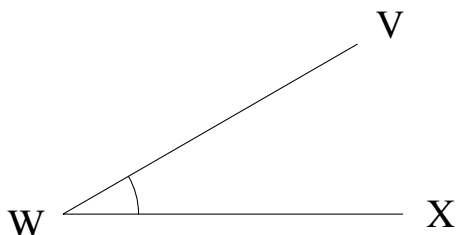


Medir Ángulos (J)

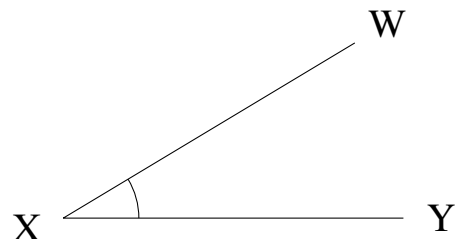
Estime y mida cada ángulo.

1.



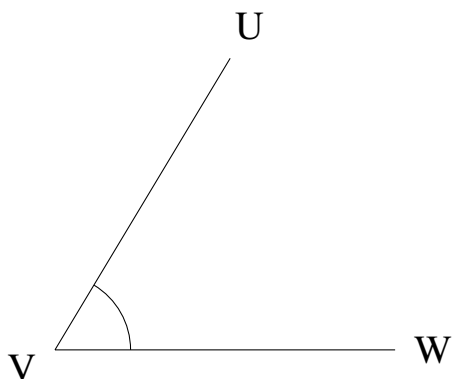
$$m\angle VWX =$$

2.



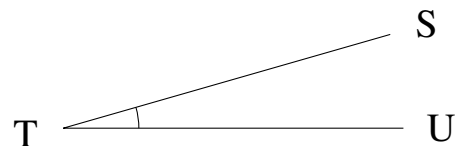
$$m\angle WXY =$$

3.



$$m\angle UVW =$$

4.



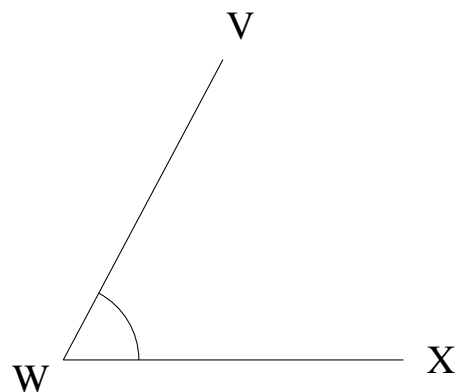
$$m\angle STU =$$

5.



$$m\angle IJK =$$

6.



$$m\angle VWX =$$