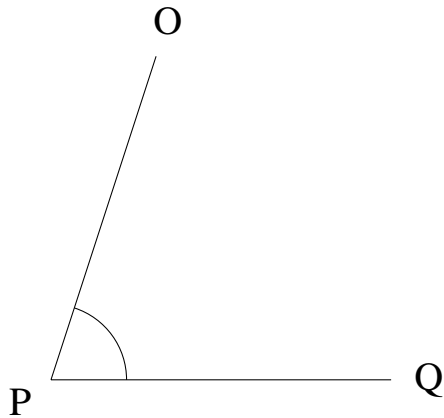


# Medir Ángulos (A)

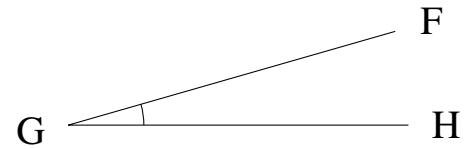
Estime y mida cada ángulo.

1.



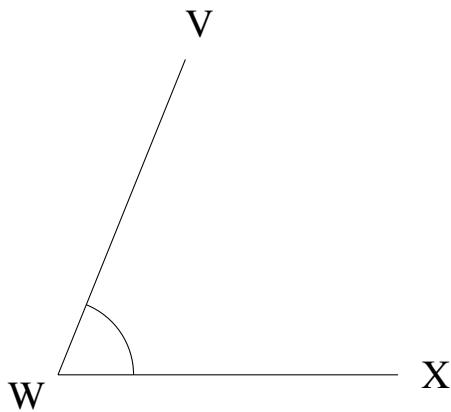
$$m\angle OPQ =$$

2.



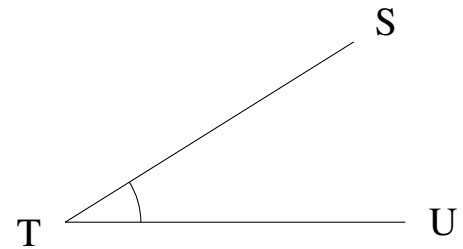
$$m\angle FGH =$$

3.



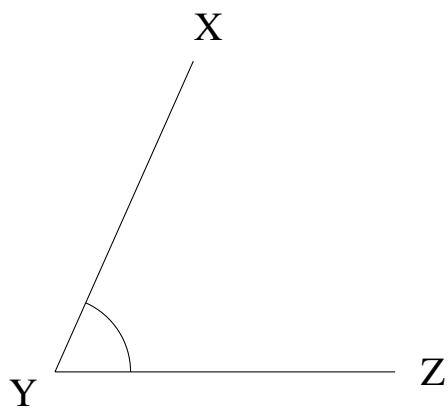
$$m\angle VWX =$$

4.



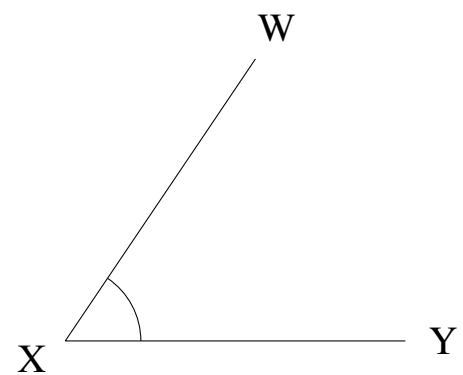
$$m\angle STU =$$

5.



$$m\angle XYZ =$$

6.

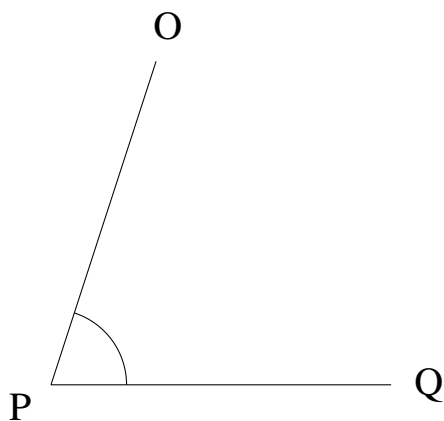


$$m\angle WXY =$$

# Medir Ángulos (A) Respuestas

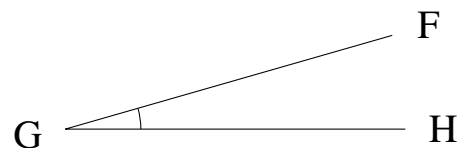
Estime y mida cada ángulo.

1.



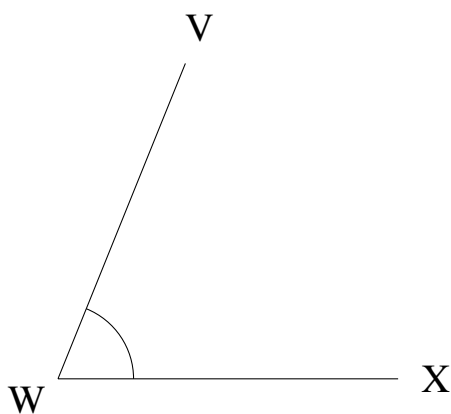
$$m\angle OPQ = 72^\circ$$

2.



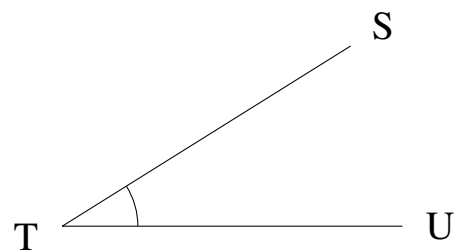
$$m\angle FGH = 16^\circ$$

3.



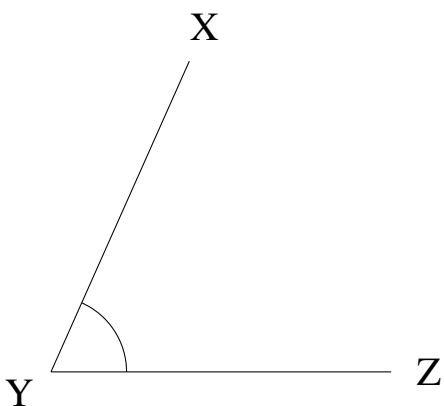
$$m\angle VWX = 68^\circ$$

4.



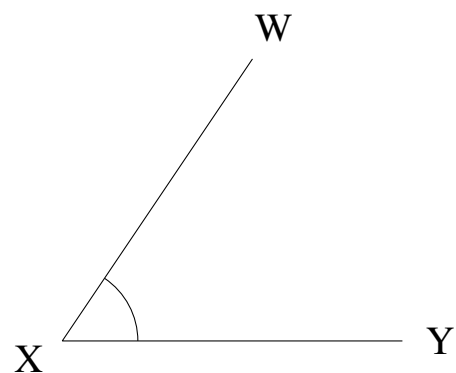
$$m\angle STU = 32^\circ$$

5.



$$m\angle XYZ = 66^\circ$$

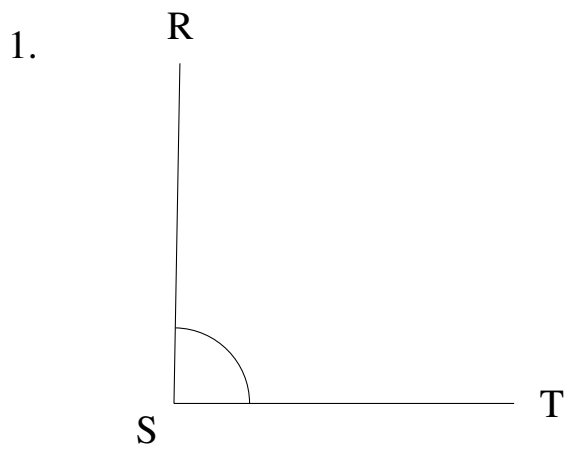
6.



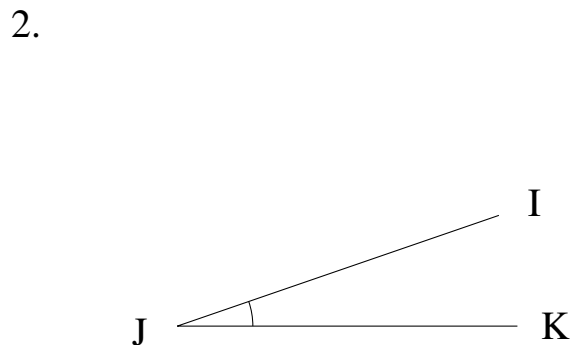
$$m\angle WXY = 56^\circ$$

# Medir Ángulos (B)

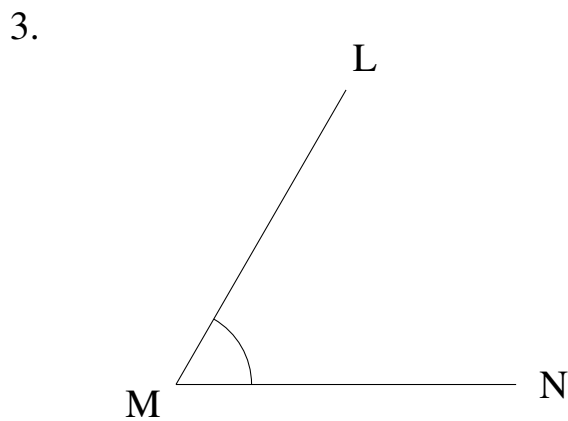
Estime y mida cada ángulo.



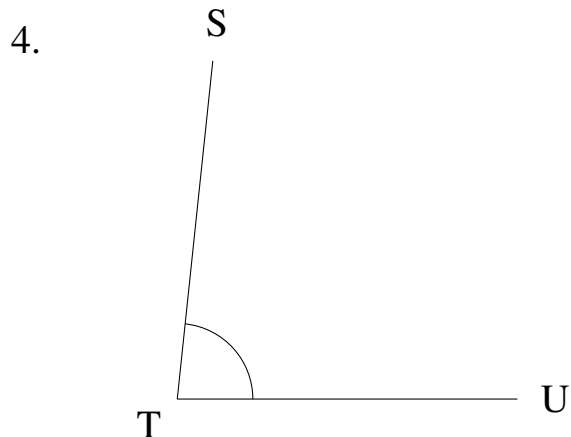
$$m\angle RST =$$



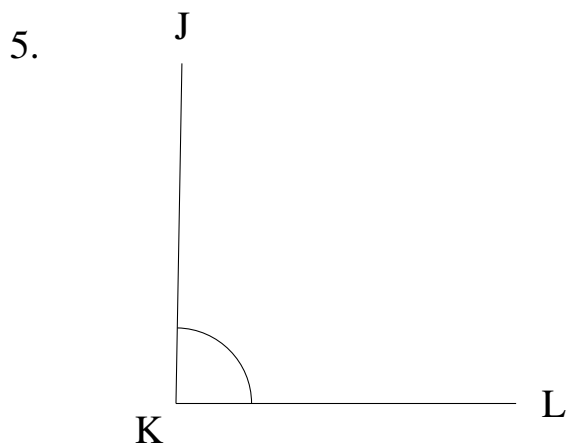
$$m\angle IJK =$$



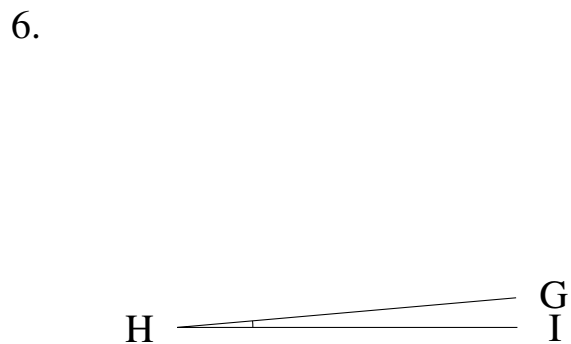
$$m\angle LMN =$$



$$m\angle STU =$$



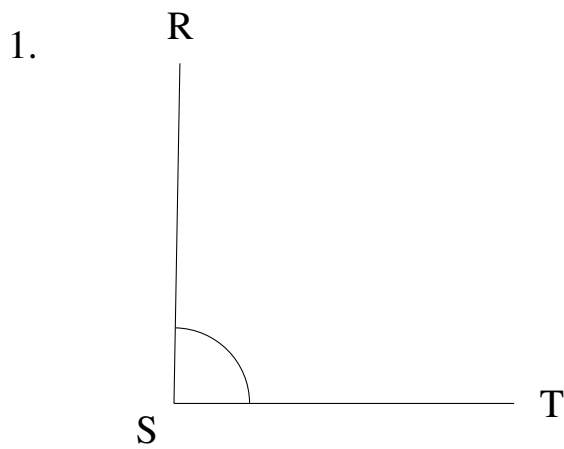
$$m\angle JKL =$$



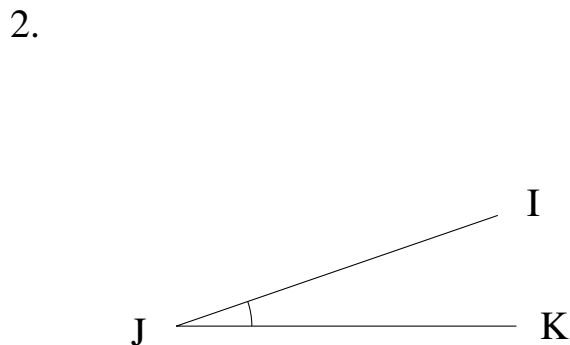
$$m\angle GHI =$$

# Medir Ángulos (B) Respuestas

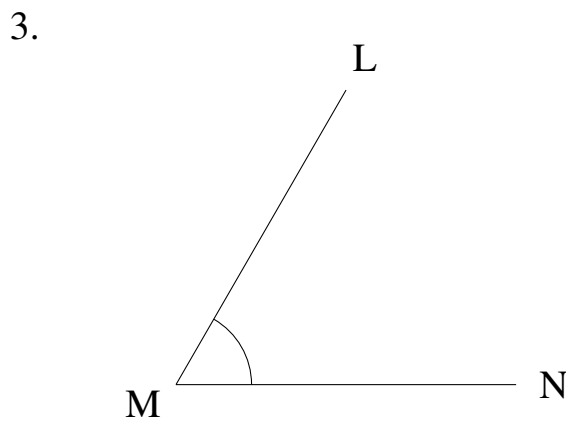
Estime y mida cada ángulo.



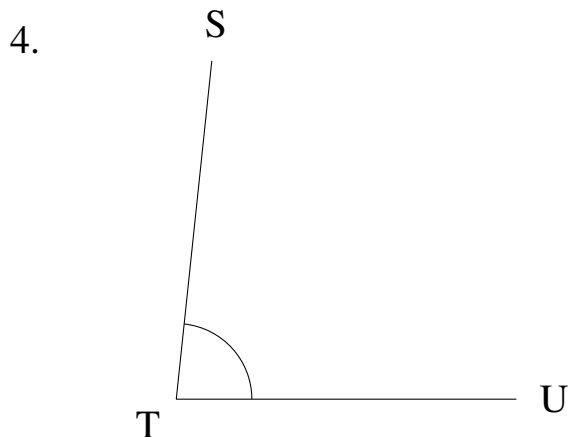
$$m\angle RST = 89^\circ$$



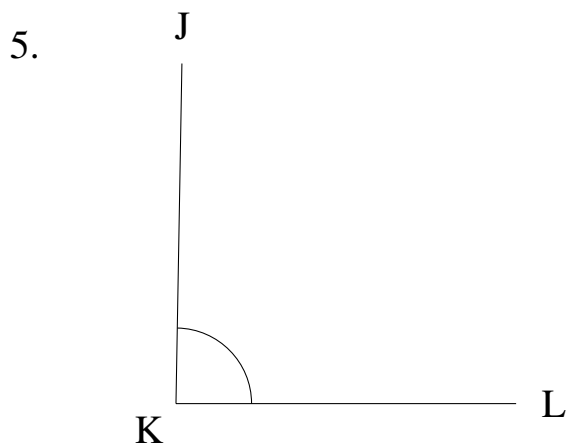
$$m\angle IJK = 19^\circ$$



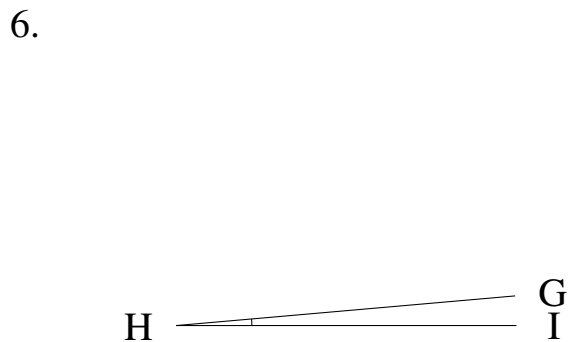
$$m\angle LMN = 60^\circ$$



$$m\angle STU = 84^\circ$$



$$m\angle JKL = 89^\circ$$

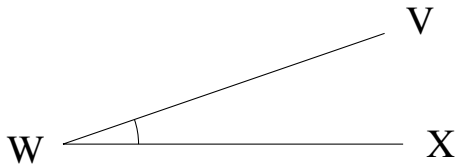


$$m\angle GHI = 5^\circ$$

# Medir Ángulos (C)

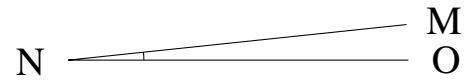
Estime y mida cada ángulo.

1.



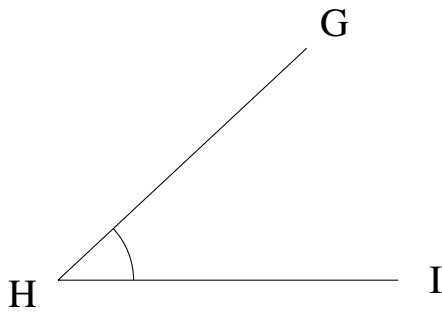
$$m\angle VWX =$$

2.



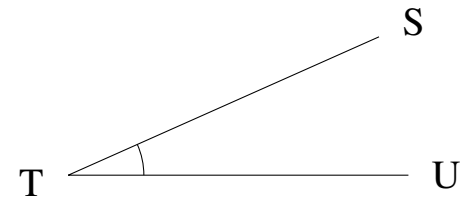
$$m\angle MNO =$$

3.



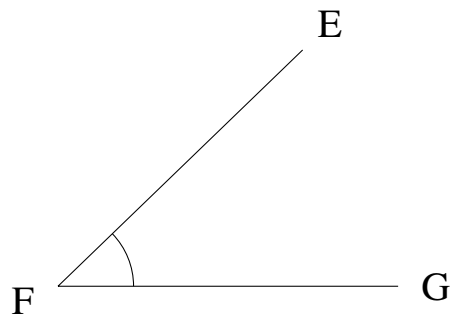
$$m\angle GHI =$$

4.



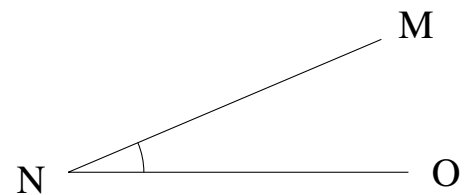
$$m\angle STU =$$

5.



$$m\angle EFG =$$

6.

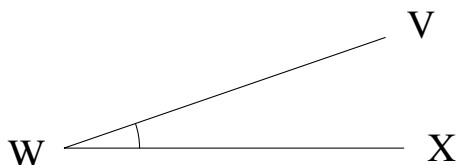


$$m\angle MNO =$$

# Medir Ángulos (C) Respuestas

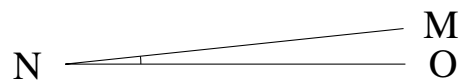
Estime y mida cada ángulo.

1.



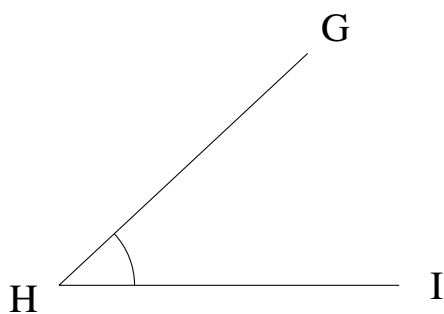
$$m\angle VWX = 19^\circ$$

2.



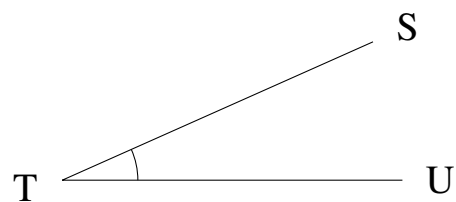
$$m\angle MNO = 6^\circ$$

3.



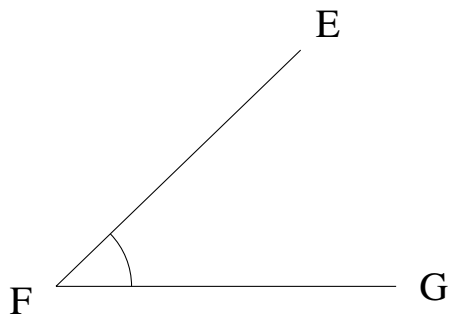
$$m\angle GHI = 43^\circ$$

4.



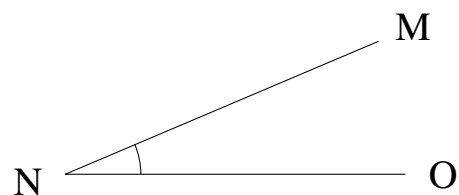
$$m\angle STU = 24^\circ$$

5.



$$m\angle EFG = 44^\circ$$

6.

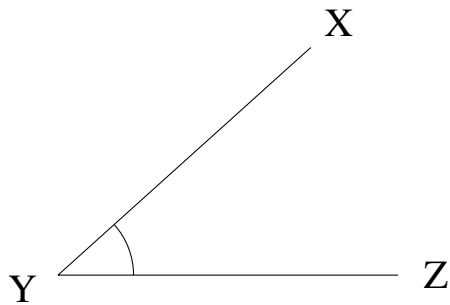


$$m\angle MNO = 23^\circ$$

# Medir Ángulos (D)

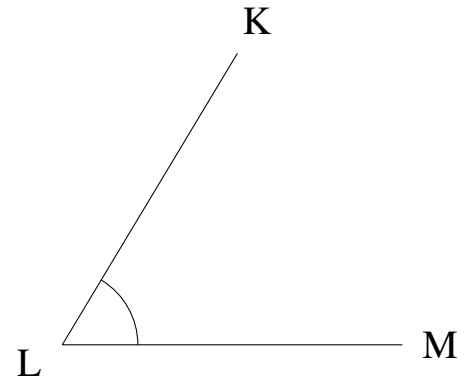
Estime y mida cada ángulo.

1.



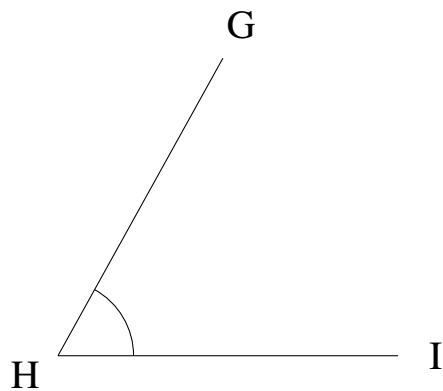
$$m\angle XYZ =$$

2.



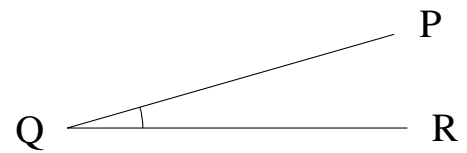
$$m\angle KLM =$$

3.



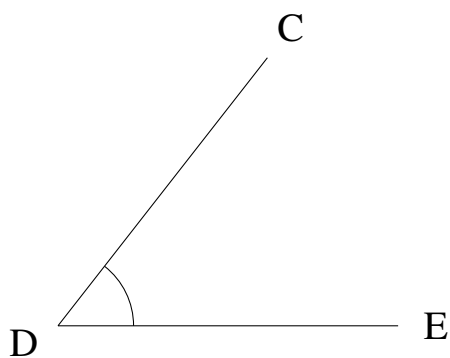
$$m\angle GHI =$$

4.



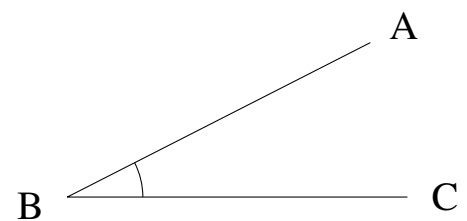
$$m\angle PQR =$$

5.



$$m\angle CDE =$$

6.

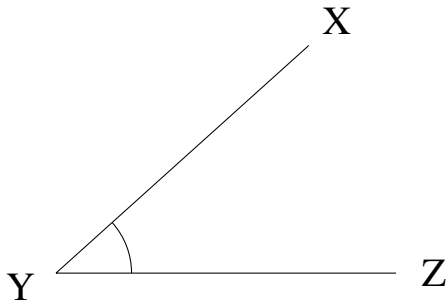


$$m\angle ABC =$$

# Medir Ángulos (D) Respuestas

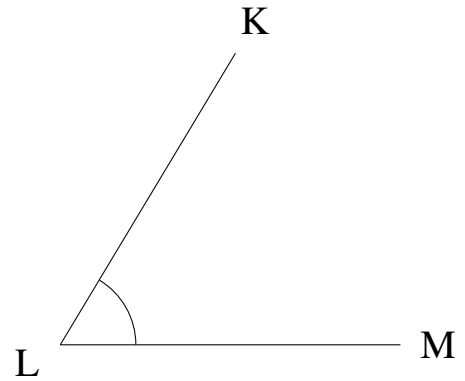
Estime y mida cada ángulo.

1.



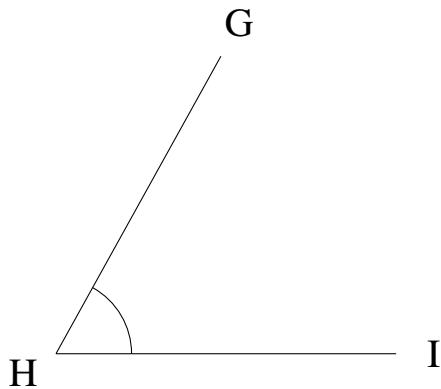
$$m\angle XYZ = 42^\circ$$

2.



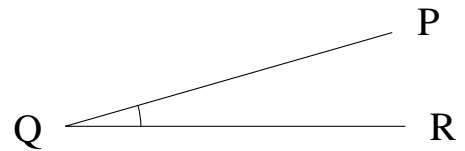
$$m\angle KLM = 59^\circ$$

3.



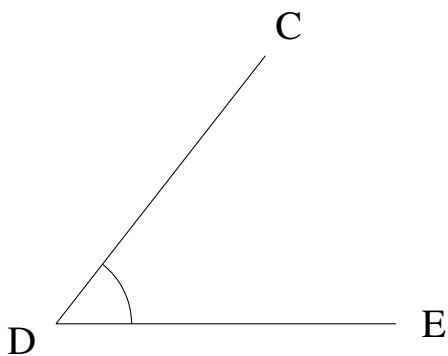
$$m\angle GHI = 61^\circ$$

4.



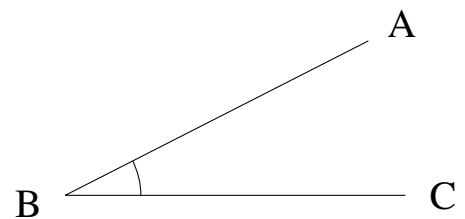
$$m\angle PQR = 16^\circ$$

5.



$$m\angle CDE = 52^\circ$$

6.



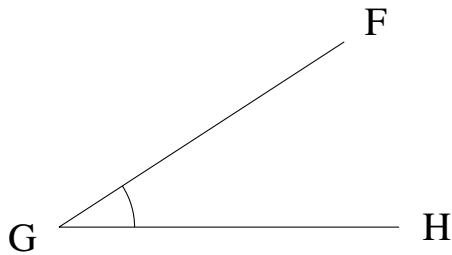
$$m\angle ABC = 27^\circ$$



# Medir Ángulos (E)

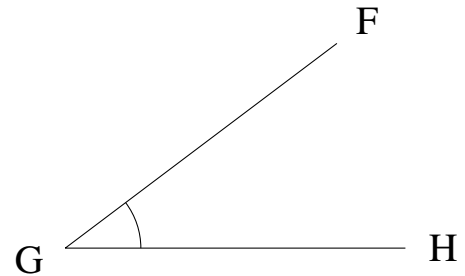
Estime y mida cada ángulo.

1.



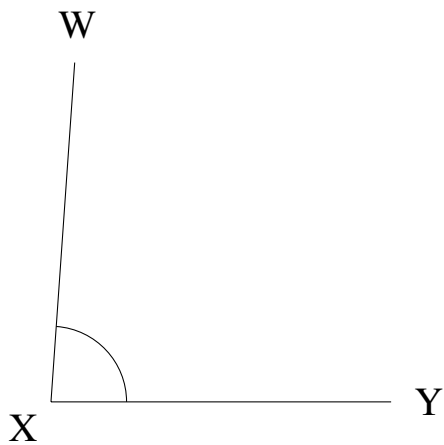
$$m\angle FGH =$$

2.



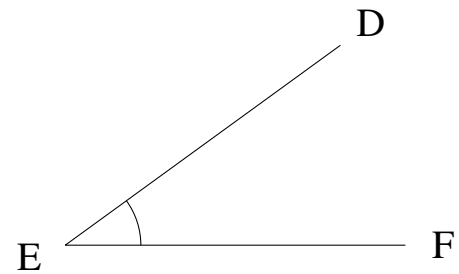
$$m\angle FGH =$$

3.



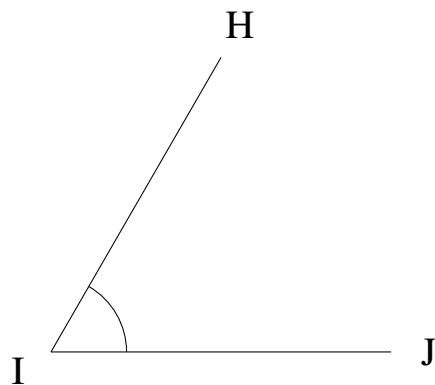
$$m\angle WXY =$$

4.



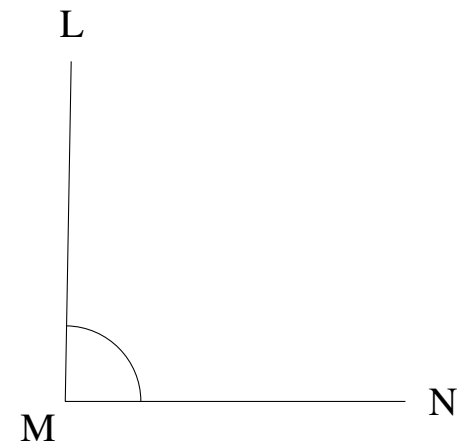
$$m\angle DEF =$$

5.



$$m\angle HIJ =$$

6.

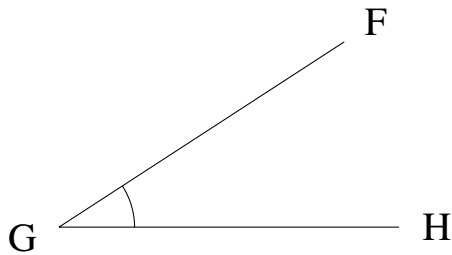


$$m\angle LMN =$$

# Medir Ángulos (E) Respuestas

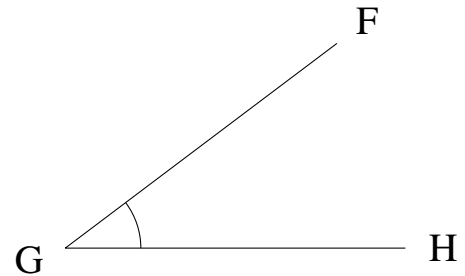
Estime y mida cada ángulo.

1.



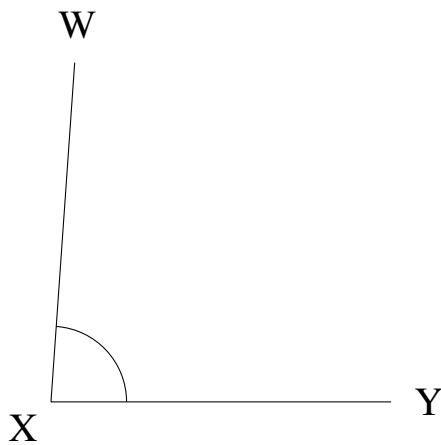
$$m\angle FGH = 33^\circ$$

2.



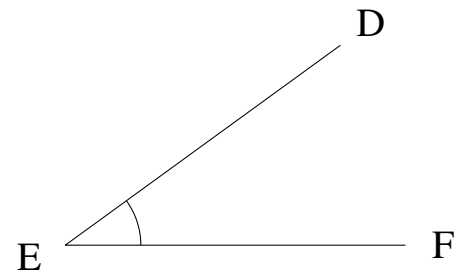
$$m\angle FGH = 37^\circ$$

3.



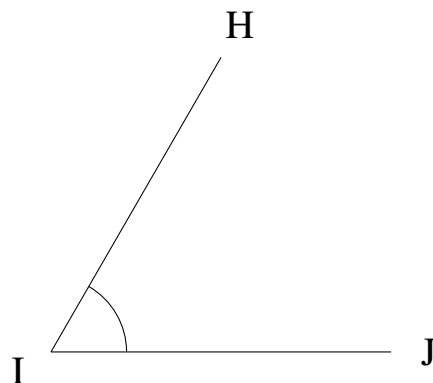
$$m\angle WXY = 86^\circ$$

4.



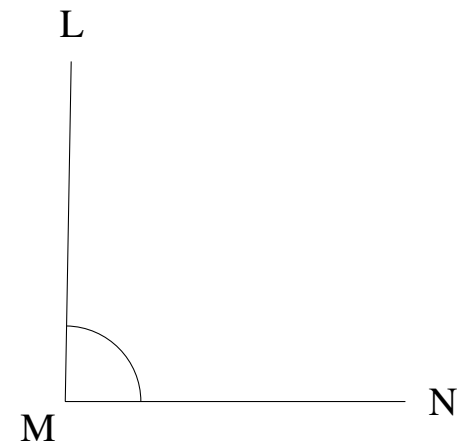
$$m\angle DEF = 36^\circ$$

5.



$$m\angle HIJ = 60^\circ$$

6.

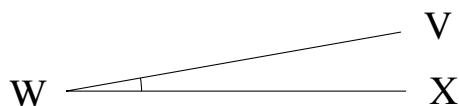


$$m\angle LMN = 89^\circ$$

# Medir Ángulos (F)

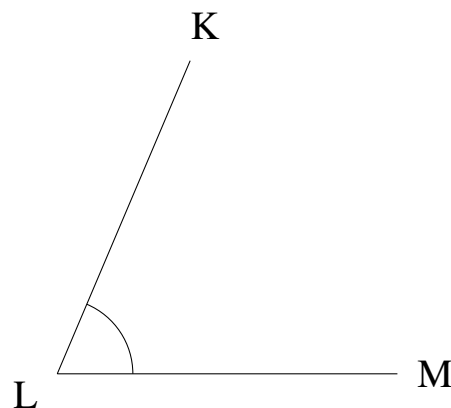
Estime y mida cada ángulo.

1.



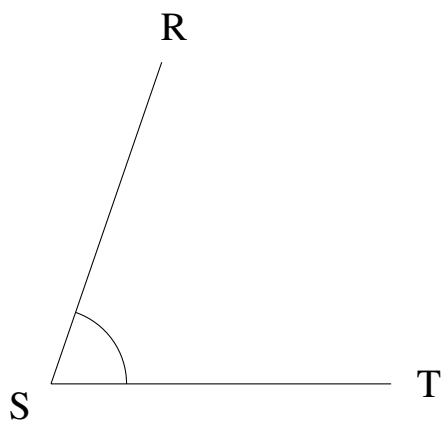
$$m\angle VWX =$$

2.



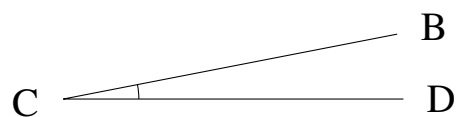
$$m\angle KLM =$$

3.



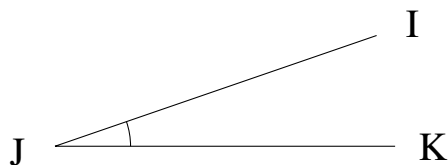
$$m\angle RST =$$

4.



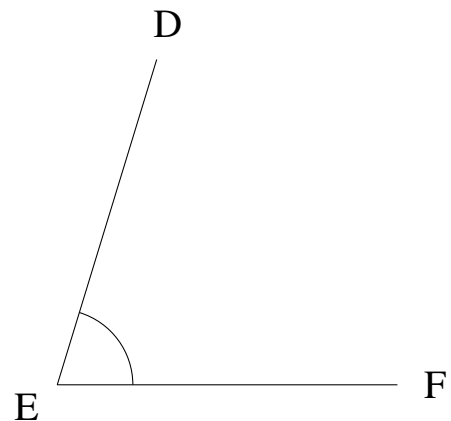
$$m\angle BCD =$$

5.



$$m\angle IJK =$$

6.

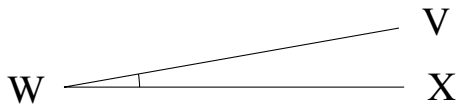


$$m\angle DEF =$$

# Medir Ángulos (F) Respuestas

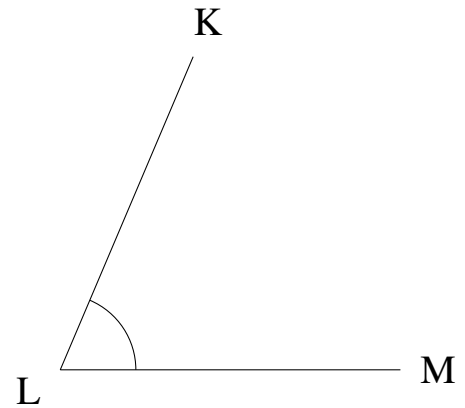
Estime y mida cada ángulo.

1.



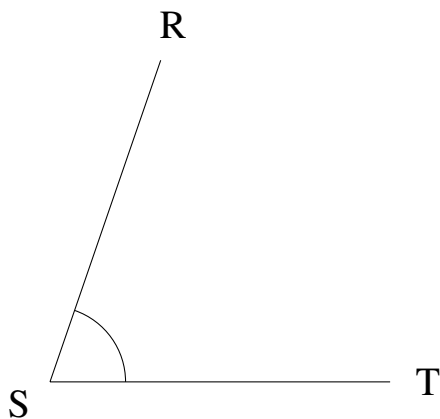
$$m\angle VWX = 10^\circ$$

2.



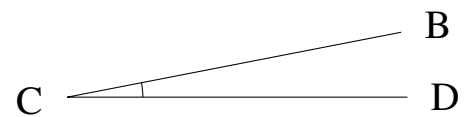
$$m\angle KLM = 67^\circ$$

3.



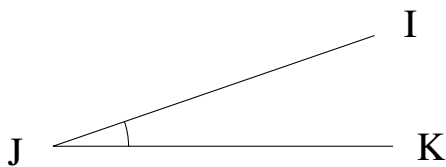
$$m\angle RST = 71^\circ$$

4.



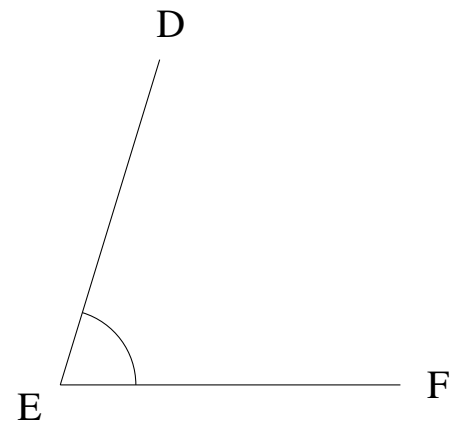
$$m\angle BCD = 11^\circ$$

5.



$$m\angle IJK = 19^\circ$$

6.

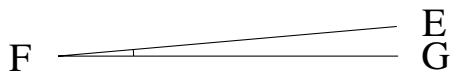


$$m\angle DEF = 73^\circ$$

# Medir Ángulos (G)

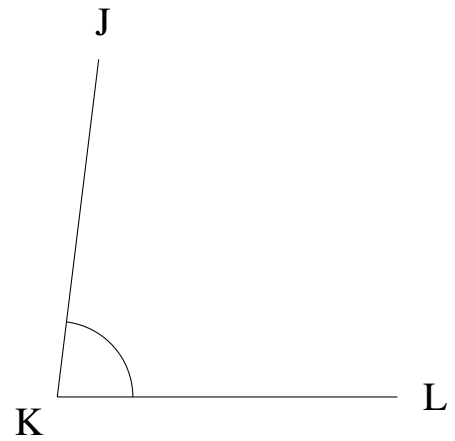
Estime y mida cada ángulo.

1.



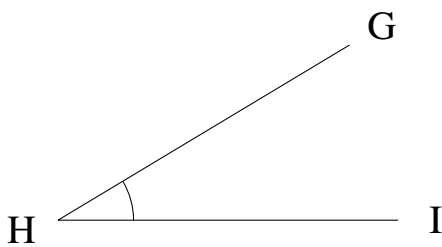
$$m\angle EFG =$$

2.



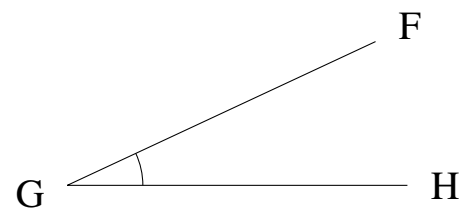
$$m\angle JKL =$$

3.



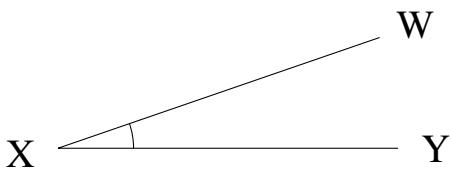
$$m\angle GHI =$$

4.



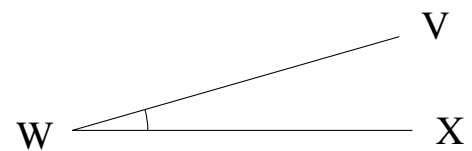
$$m\angle FGH =$$

5.



$$m\angle WXY =$$

6.

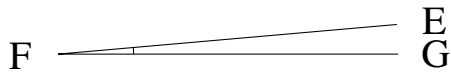


$$m\angle VWX =$$

# Medir Ángulos (G) Respuestas

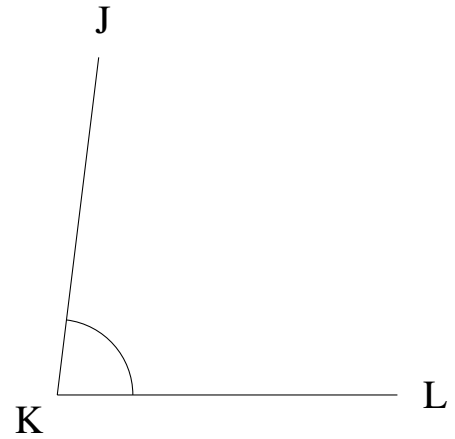
Estime y mida cada ángulo.

1.



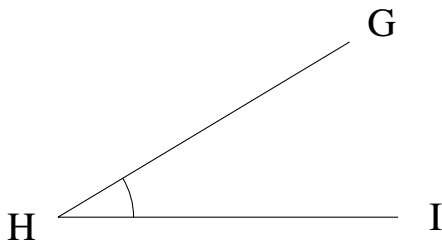
$$m\angle EFG = 5^\circ$$

2.



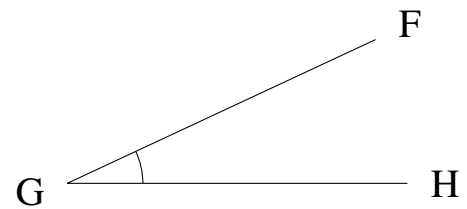
$$m\angle JKL = 83^\circ$$

3.



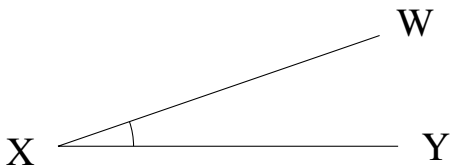
$$m\angle GHI = 31^\circ$$

4.



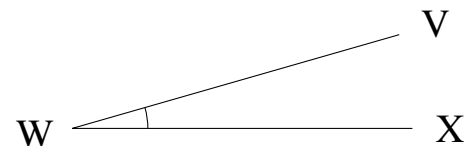
$$m\angle FGH = 25^\circ$$

5.



$$m\angle WXY = 19^\circ$$

6.

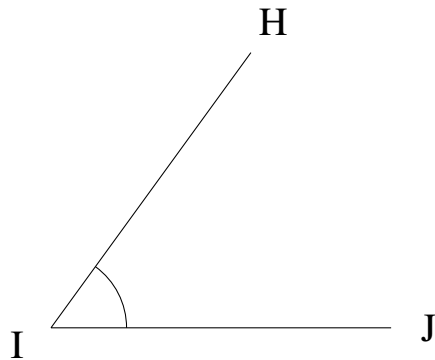


$$m\angle VWX = 16^\circ$$

# Medir Ángulos (H)

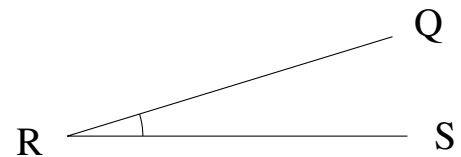
Estime y mida cada ángulo.

1.



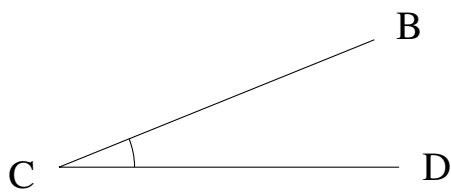
$$m\angle HIJ =$$

2.



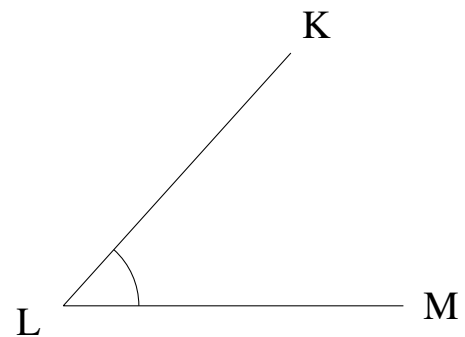
$$m\angle QRS =$$

3.



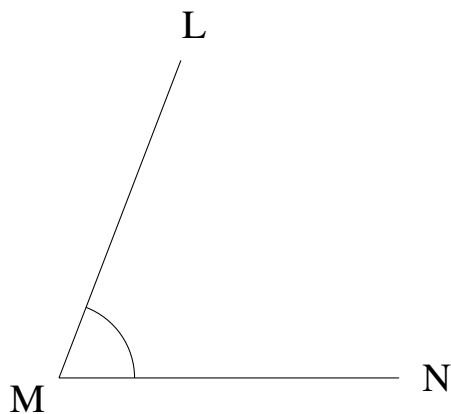
$$m\angle BCD =$$

4.



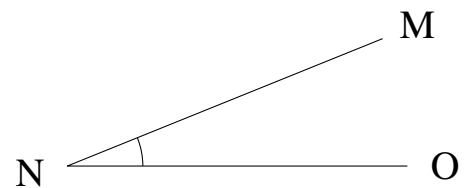
$$m\angle KLM =$$

5.



$$m\angle LMN =$$

6.

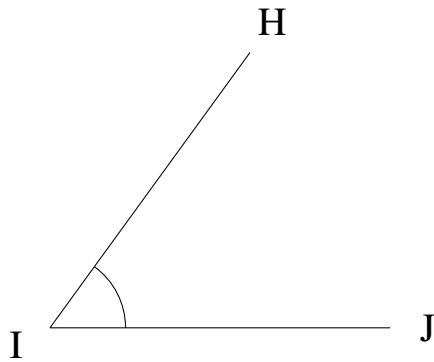


$$m\angle MNO =$$

# Medir Ángulos (H) Respuestas

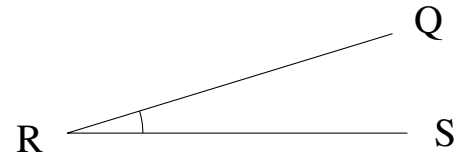
Estime y mida cada ángulo.

1.



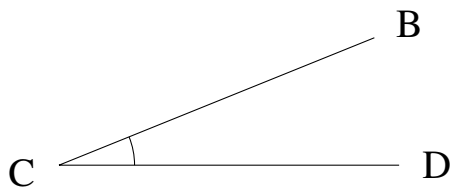
$$m\angle HIJ = 54^\circ$$

2.



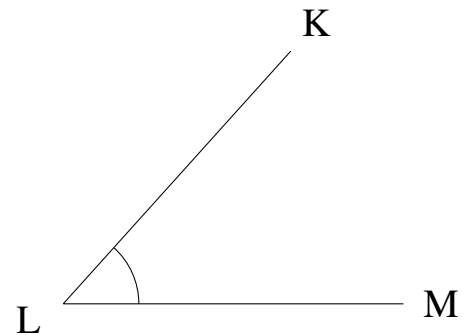
$$m\angle QRS = 17^\circ$$

3.



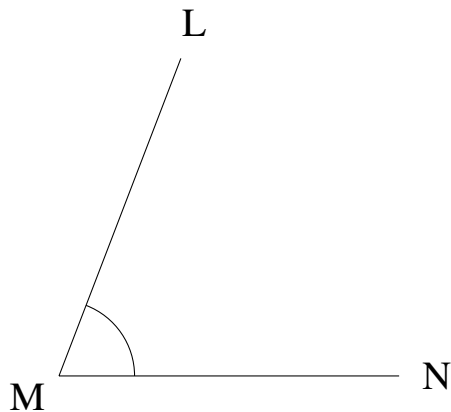
$$m\angle BCD = 22^\circ$$

4.



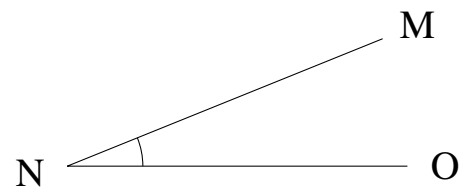
$$m\angle KLM = 48^\circ$$

5.



$$m\angle LMN = 69^\circ$$

6.



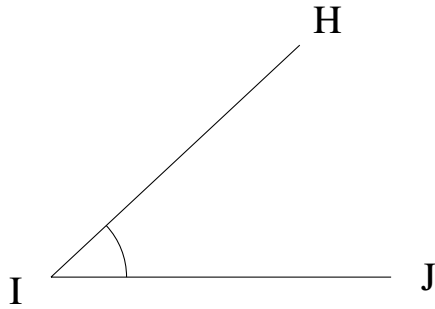
$$m\angle MNO = 22^\circ$$



# Medir Ángulos (I)

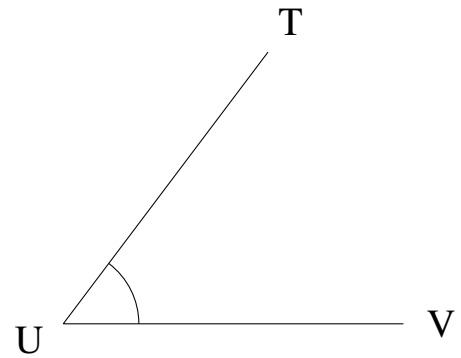
Estime y mida cada ángulo.

1.



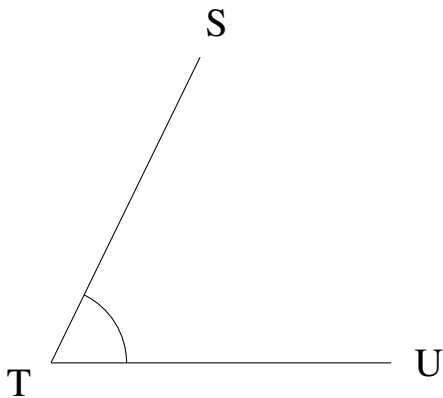
$$m\angle HIJ =$$

2.



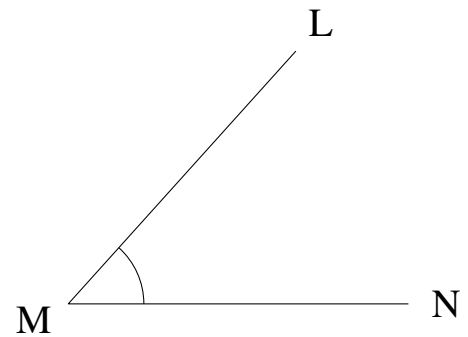
$$m\angle TUV =$$

3.



$$m\angle STU =$$

4.



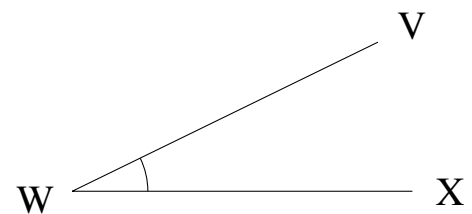
$$m\angle LMN =$$

5.



$$m\angle OPQ =$$

6.

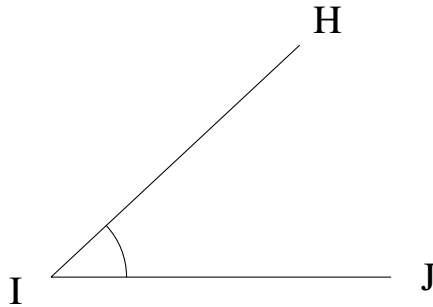


$$m\angle VWX =$$

# Medir Ángulos (I) Respuestas

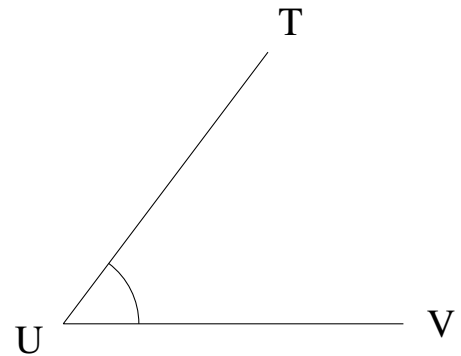
Estime y mida cada ángulo.

1.



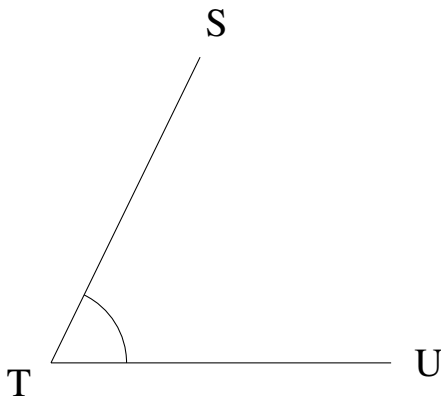
$$m\angle HIJ = 43^\circ$$

2.



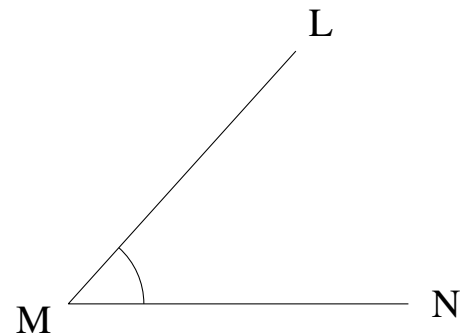
$$m\angle TUV = 53^\circ$$

3.



$$m\angle STU = 64^\circ$$

4.



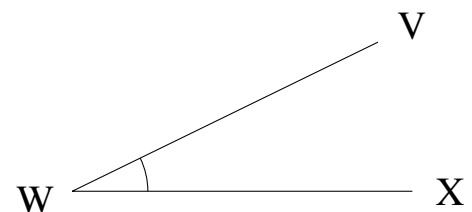
$$m\angle LMN = 48^\circ$$

5.



$$m\angle OPQ = 5^\circ$$

6.

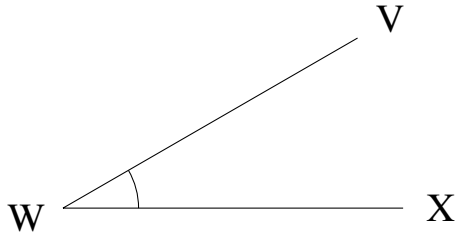


$$m\angle VWX = 26^\circ$$

# Medir Ángulos (J)

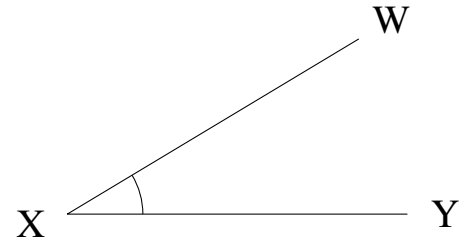
Estime y mida cada ángulo.

1.



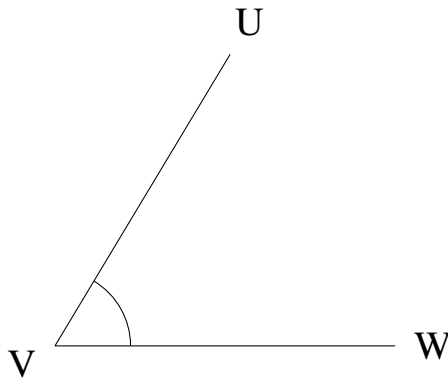
$$m\angle VWX =$$

2.



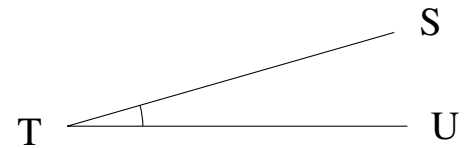
$$m\angle WXY =$$

3.



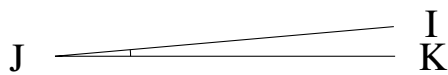
$$m\angle UVW =$$

4.



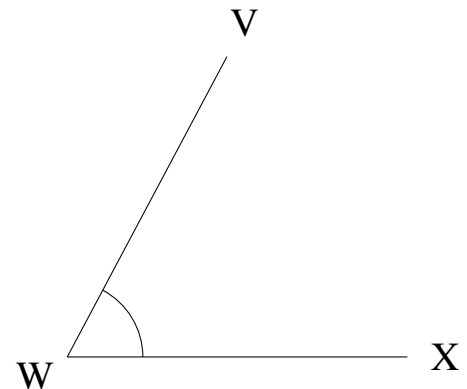
$$m\angle STU =$$

5.



$$m\angle IJK =$$

6.

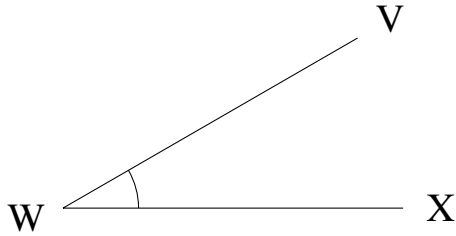


$$m\angle VWX =$$

# Medir Ángulos (J) Respuestas

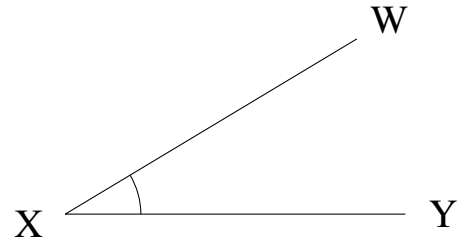
Estime y mida cada ángulo.

1.



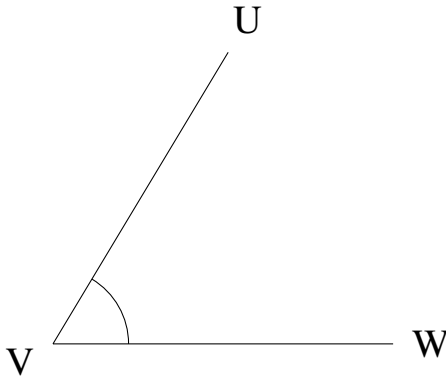
$$m\angle VWX = 30^\circ$$

2.



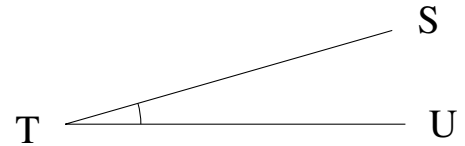
$$m\angle WXY = 31^\circ$$

3.



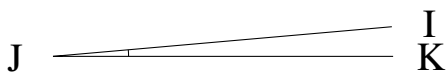
$$m\angle UVW = 59^\circ$$

4.



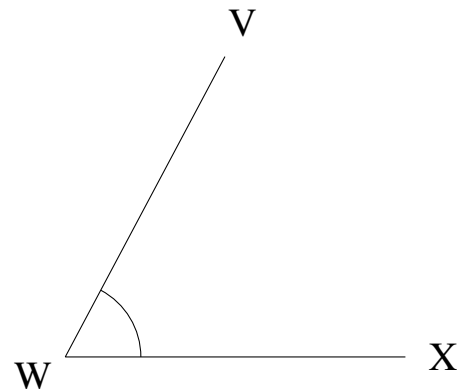
$$m\angle STU = 16^\circ$$

5.



$$m\angle IJK = 5^\circ$$

6.



$$m\angle VWX = 62^\circ$$