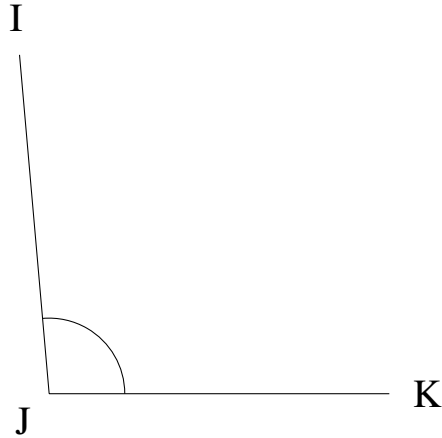


# Medir Ángulos (G)

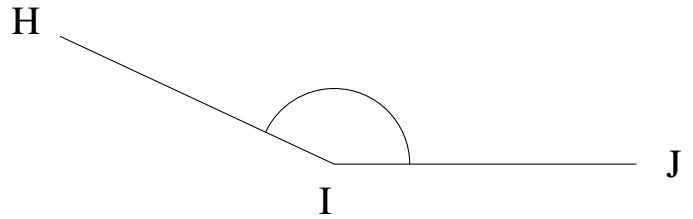
Estime y mida cada ángulo.

1.



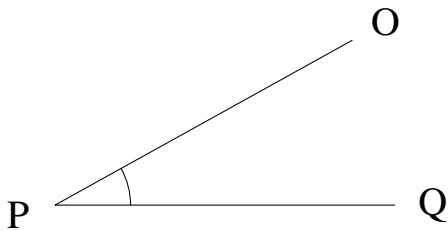
$$m\angle IJK =$$

2.



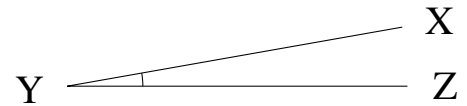
$$m\angle HIJ =$$

3.



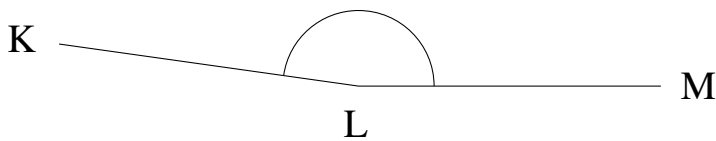
$$m\angle OPQ =$$

4.



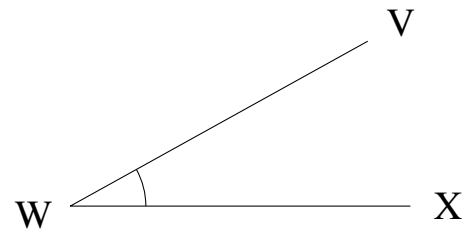
$$m\angle XYZ =$$

5.



$$m\angle KLM =$$

6.



$$m\angle VWX =$$