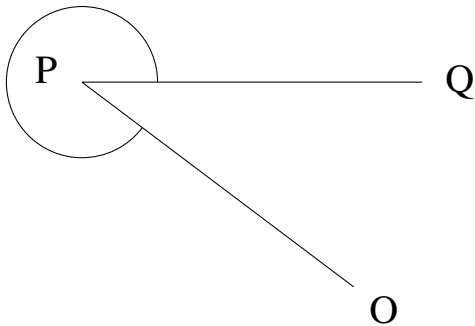


Medir Ángulos (C)

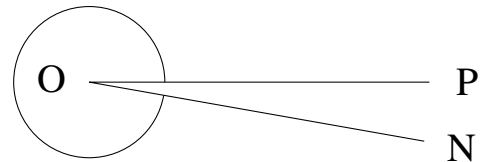
Estime y mida cada ángulo.

1.



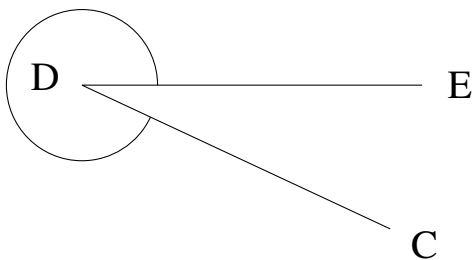
$$m\angle OPQ =$$

2.



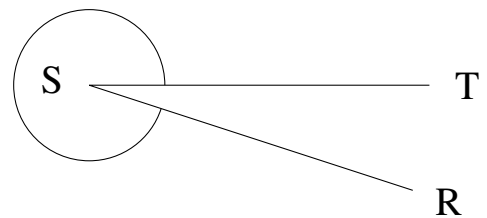
$$m\angle NOP =$$

3.



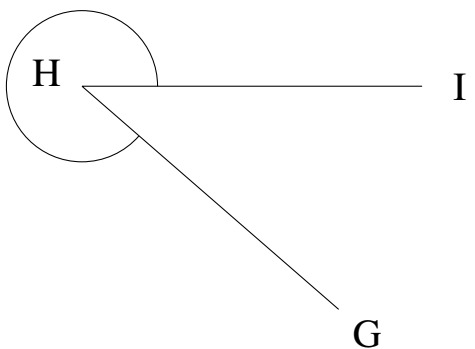
$$m\angle CDE =$$

4.



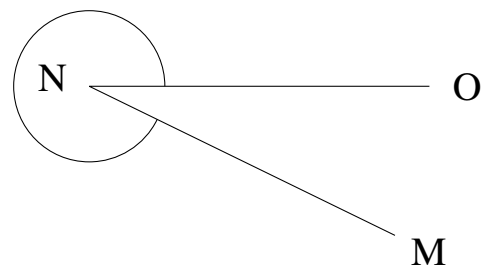
$$m\angle RST =$$

5.



$$m\angle GHI =$$

6.

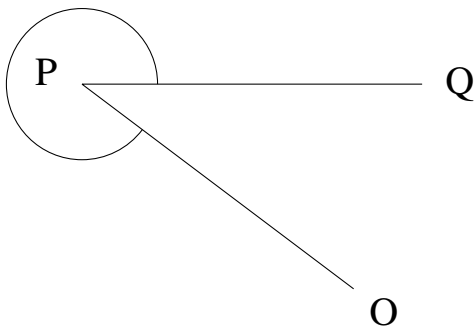


$$m\angle MNO =$$

Medir Ángulos (C) Respuestas

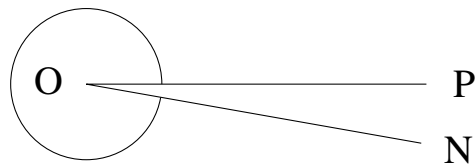
Estime y mida cada ángulo.

1.



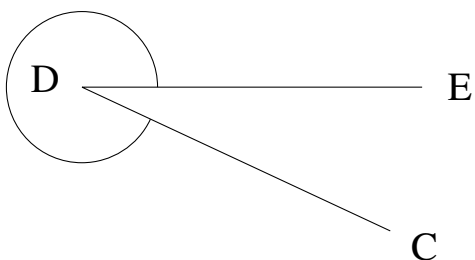
$$m\angle OPQ = 323^\circ$$

2.



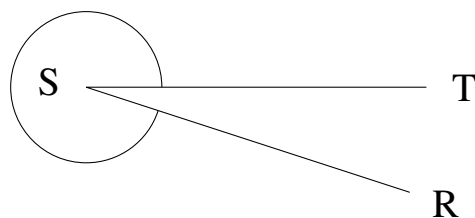
$$m\angle NOP = 350^\circ$$

3.



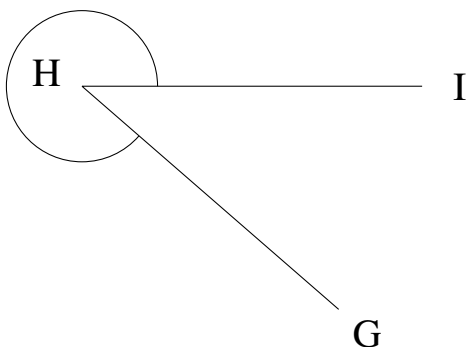
$$m\angle CDE = 335^\circ$$

4.



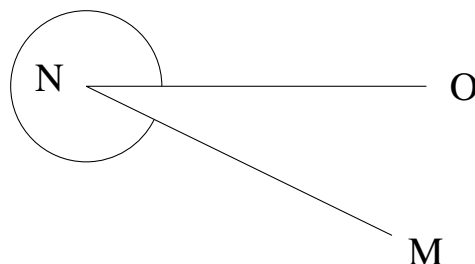
$$m\angle RST = 342^\circ$$

5.



$$m\angle GHI = 319^\circ$$

6.



$$m\angle MNO = 334^\circ$$