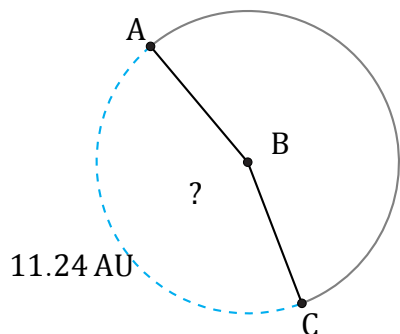


Amplitud de Arcos (C)

Nombre: _____

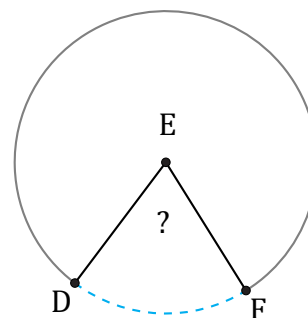
Fecha: _____

Calcule la amplitud angular de cada arco.



Circunferencia = 25.13 AU

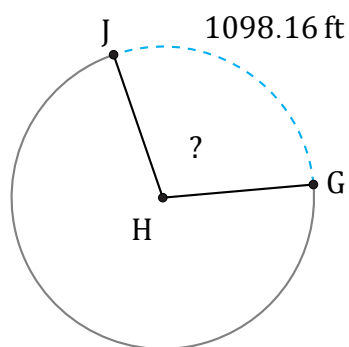
$\angle ABC =$



3.61 m

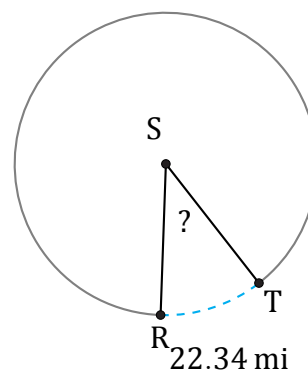
Circunferencia = 18.85 m

$\angle DEF =$



Circunferencia = 3801.33 ft

$\angle GHJ =$



Circunferencia = 201.06 mi

$\angle RST =$