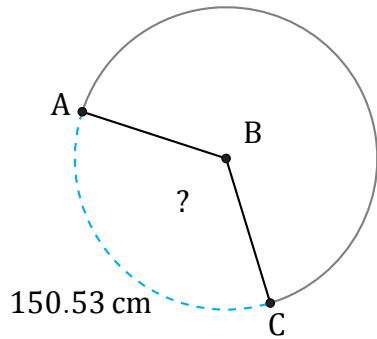


Amplitud de Arcos (D)

Nombre: _____

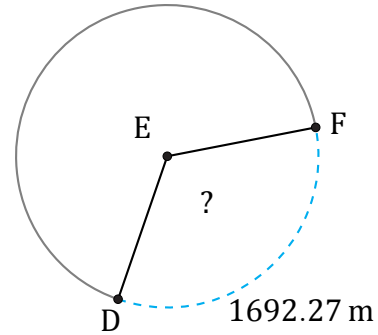
Fecha: _____

Calcule la amplitud angular de cada arco.



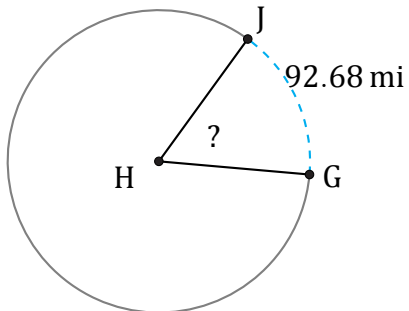
Circunferencia = 433.54 cm

$\angle ABC =$



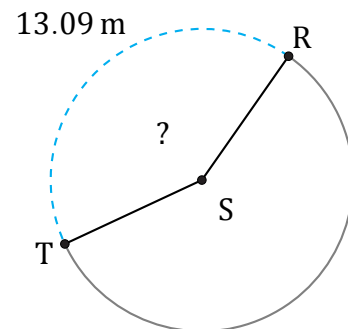
Circunferencia = 5076.81 m

$\angle DEF =$



Circunferencia = 565.49 mi

$\angle GHJ =$



Circunferencia = 31.42 m

$\angle RST =$