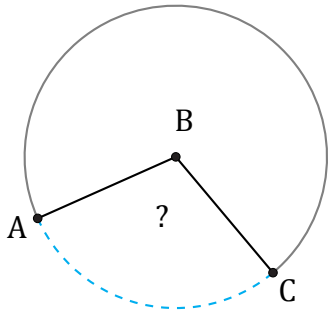


Amplitud de Arcos (E)

Nombre: _____

Fecha: _____

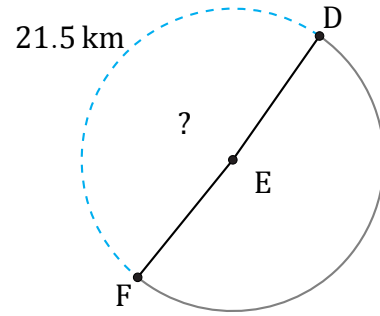
Calcule la amplitud angular de cada arco.



7.4 cm

Circunferencia = 25.13 cm

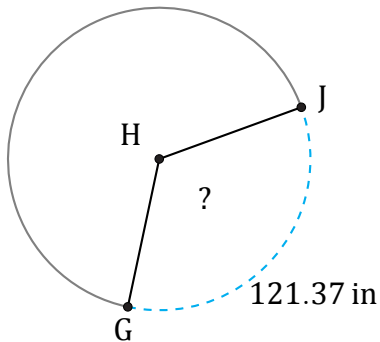
$\angle ABC =$



21.5 km

Circunferencia = 43.98 km

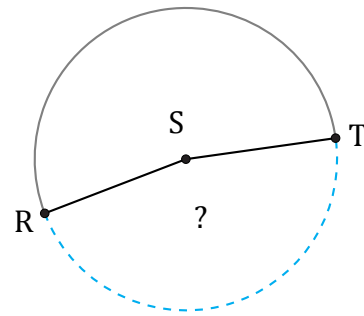
$\angle DEF =$



121.37 in

Circunferencia = 358.14 in

$\angle GHJ =$



125.33 mi

Circunferencia = 270.18 mi

$\angle RST =$