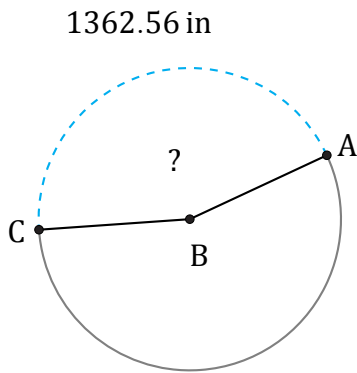


Amplitud de Arcos (F)

Nombre: _____

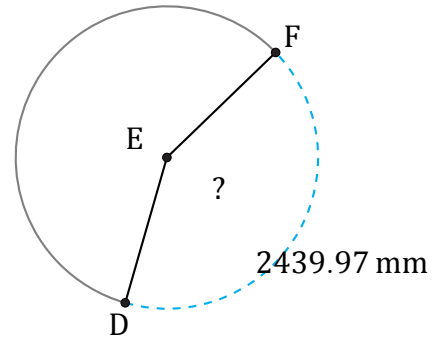
Fecha: _____

Calcule la amplitud angular de cada arco.



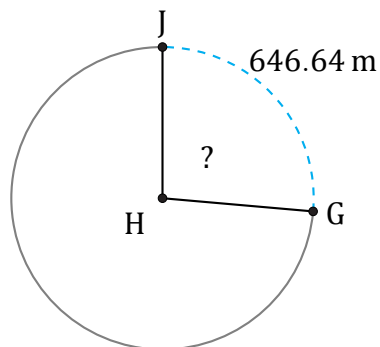
Circunferencia = 3085.04 in

$\angle ABC =$



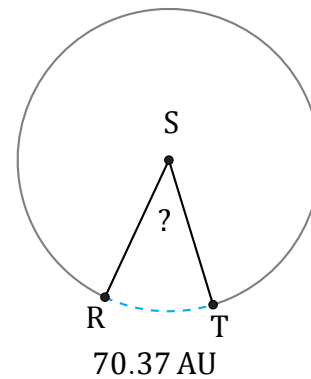
Circunferencia = 5855.93 mm

$\angle DEF =$



Circunferencia = 2450.44 m

$\angle GHJ =$



Circunferencia = 603.19 AU

$\angle RST =$