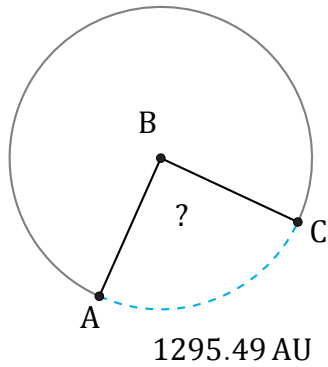


Amplitud de Arcos (G)

Nombre: _____

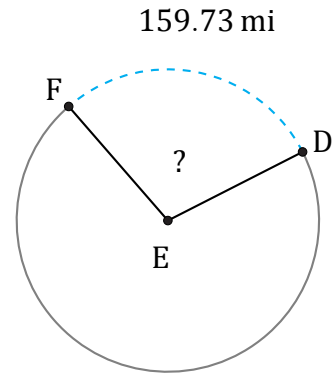
Fecha: _____

Calcule la amplitud angular de cada arco.



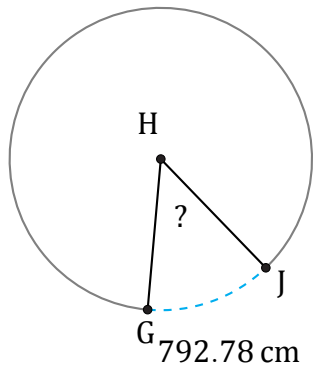
Circunferencia = 5240.18 AU

$\angle ABC =$



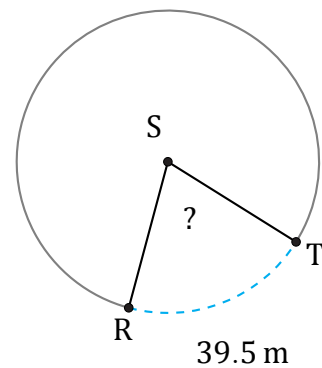
Circunferencia = 552.92 mi

$\angle DEF =$



Circunferencia = 5824.51 cm

$\angle GHJ =$



Circunferencia = 194.78 m

$\angle RST =$