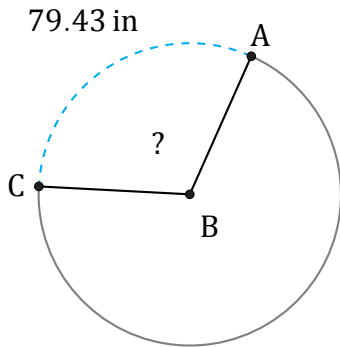


# Amplitud de Arcos (I)

Nombre: \_\_\_\_\_

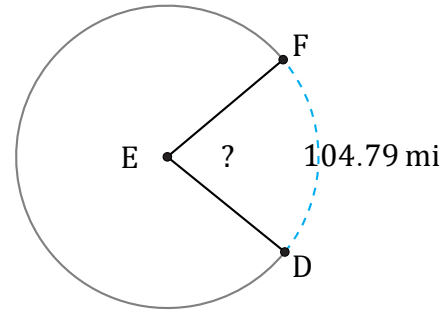
Fecha: \_\_\_\_\_

Calcule la amplitud angular de cada arco.



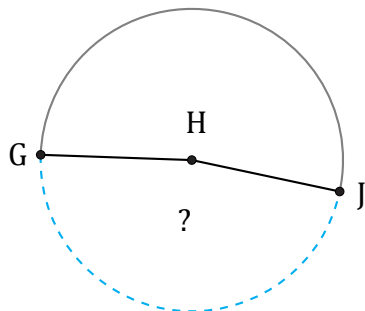
Circunferencia = 257.61 in

$\angle ABC =$



Circunferencia = 477.52 mi

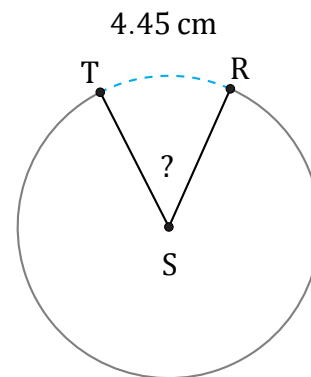
$\angle DEF =$



41.54 m

Circunferencia = 87.96 m

$\angle GHJ =$



Circunferencia = 31.42 cm

$\angle RST =$