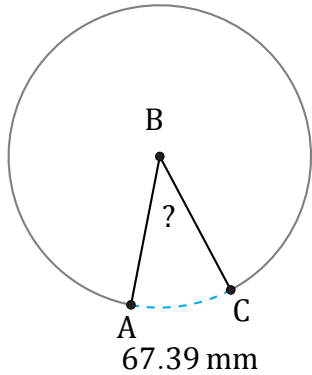


# Amplitud de Arcos (J)

Nombre: \_\_\_\_\_

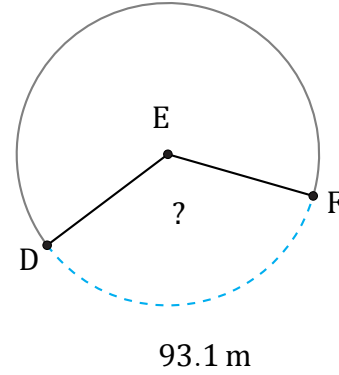
Fecha: \_\_\_\_\_

Calcule la amplitud angular de cada arco.



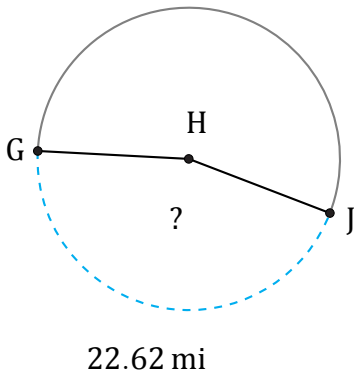
Circunferencia =  $622.04 \text{ mm}$

$\angle ABC =$



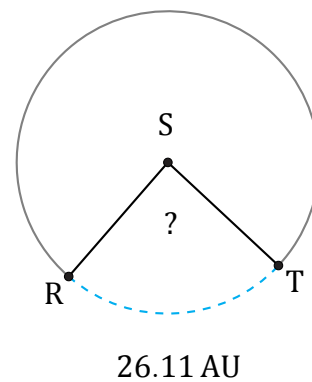
Circunferencia =  $263.89 \text{ m}$

$\angle DEF =$



Circunferencia =  $50.27 \text{ mi}$

$\angle GHJ =$



Circunferencia =  $106.81 \text{ AU}$

$\angle RST =$