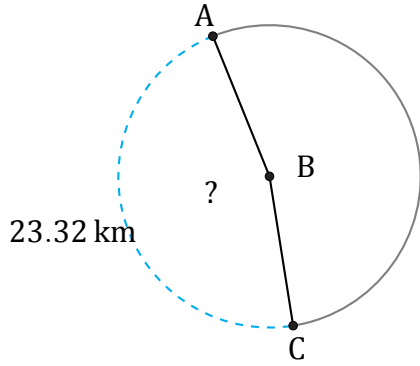


Amplitud de Arcos (B)

Nombre: _____

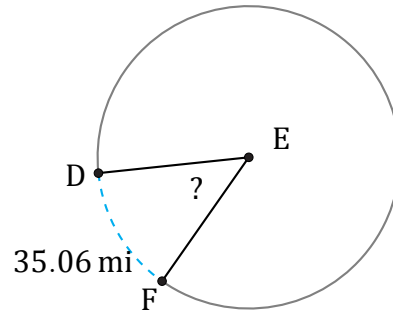
Fecha: _____

Calcule la amplitud angular de cada arco.



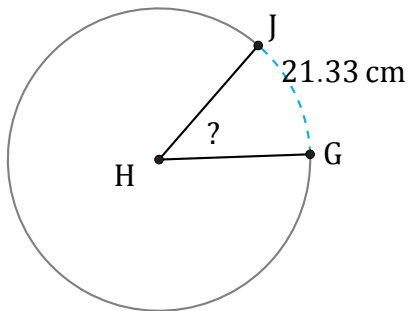
Diámetro = 16 km

$\angle ABC =$



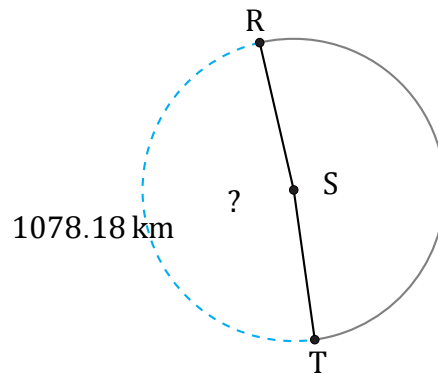
Diámetro = 82 mi

$\angle DEF =$



Diámetro = 52 cm

$\angle GHJ =$



Diámetro = 706 km

$\angle RST =$