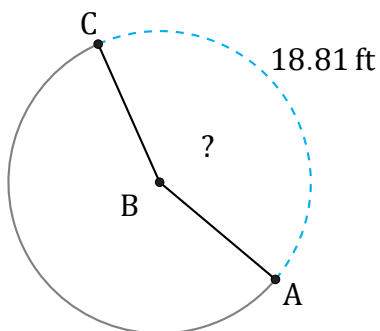


Amplitud de Arcos (C)

Nombre: _____

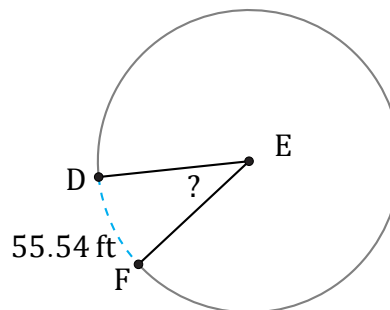
Fecha: _____

Calcule la amplitud angular de cada arco.



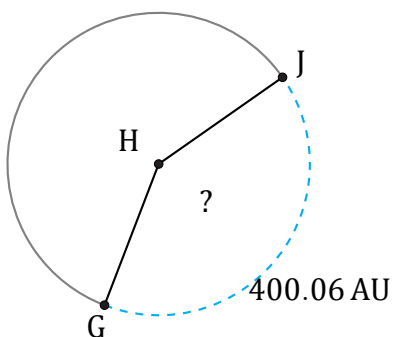
Diámetro = 14 ft

$\angle ABC =$



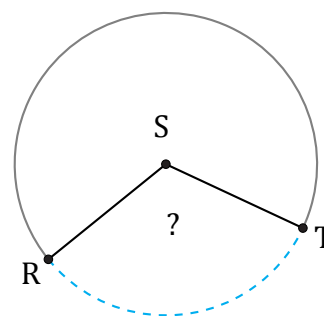
Diámetro = 172 ft

$\angle DEF =$



Diámetro = 314 AU

$\angle GHJ =$



1915.25 mi

Diámetro = 1892 mi

$\angle RST =$