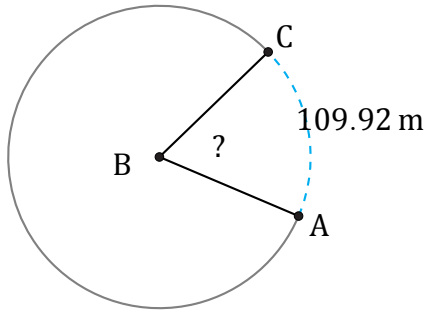


# Amplitud de Arcos (D)

Nombre: \_\_\_\_\_

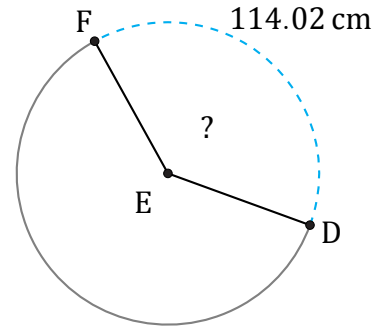
Fecha: \_\_\_\_\_

Calcule la amplitud angular de cada arco.



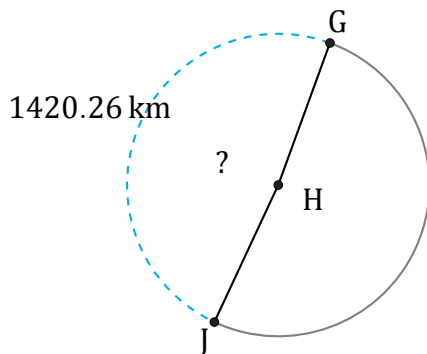
Diámetro = 188 m

$\angle ABC =$



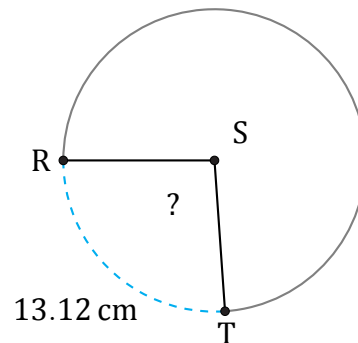
Diámetro = 94 cm

$\angle DEF =$



Diámetro = 930 km

$\angle GHJ =$



Diámetro = 16 cm

$\angle RST =$