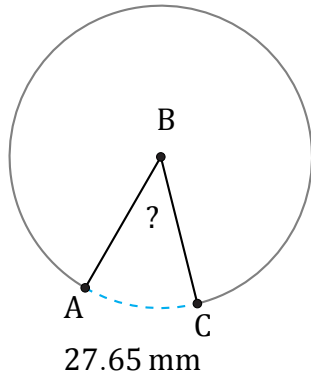


Amplitud de Arcos (E)

Nombre: _____

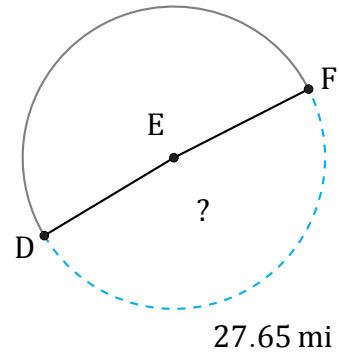
Fecha: _____

Calcule la amplitud angular de cada arco.



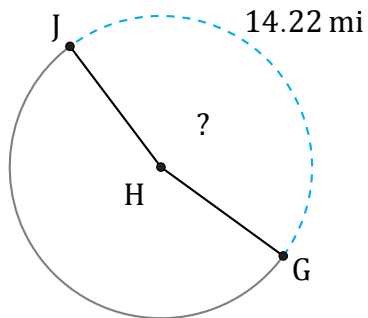
Diámetro = 72 mm

$\angle ABC =$



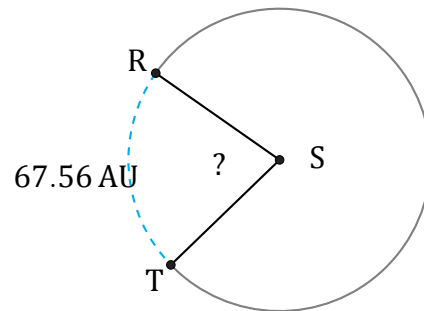
Diámetro = 18 mi

$\angle DEF =$



Diámetro = 10 mi

$\angle GHJ =$



Diámetro = 98 AU

$\angle RST =$