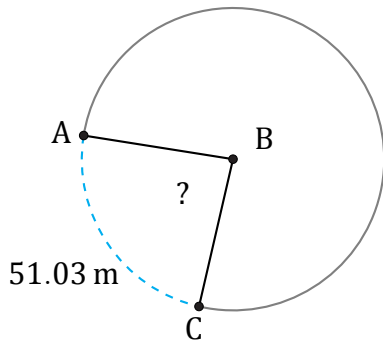


Amplitud de Arcos (F)

Nombre: _____

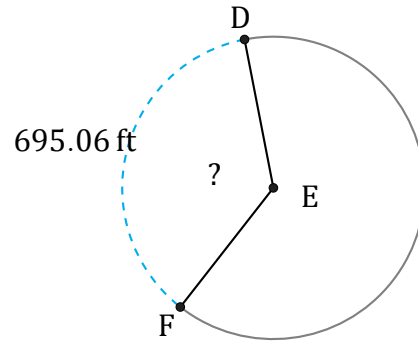
Fecha: _____

Calcule la amplitud angular de cada arco.



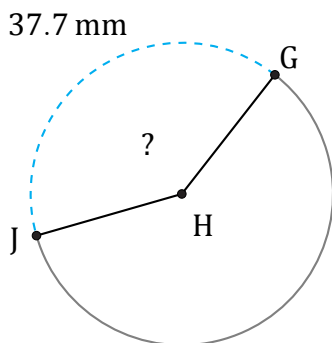
Diámetro = 68 m

$\angle ABC =$



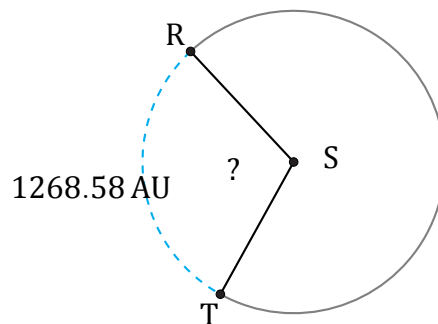
Diámetro = 608 ft

$\angle DEF =$



Diámetro = 30 mm

$\angle GHJ =$



Diámetro = 1346 AU

$\angle RST =$