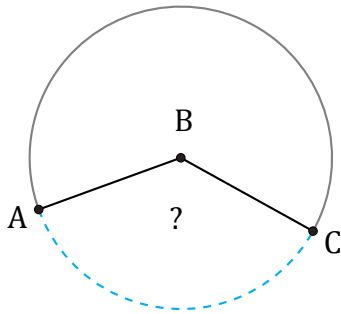


Amplitud de Arcos (G)

Nombre: _____

Fecha: _____

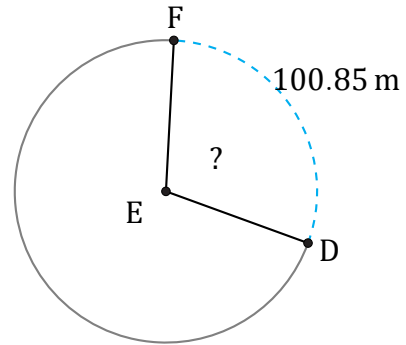
Calcule la amplitud angular de cada arco.



1703.35 km

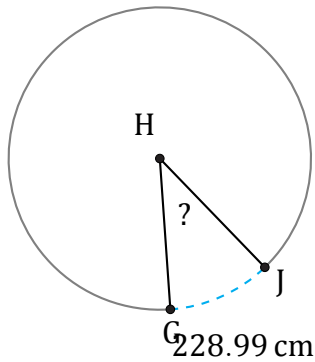
Diámetro = 1490 km

$\angle ABC =$



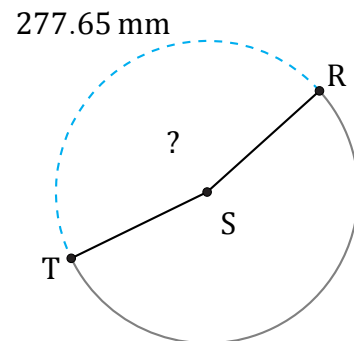
Diámetro = 108 m

$\angle DEF =$



Diámetro = 656 cm

$\angle GHJ =$



Diámetro = 194 mm

$\angle RST =$