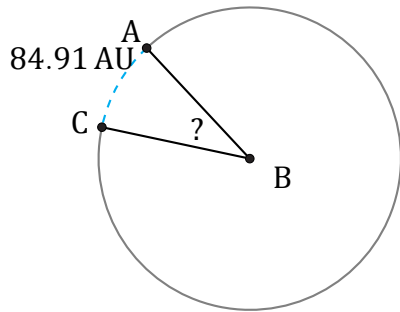


Amplitud de Arcos (I)

Nombre: _____

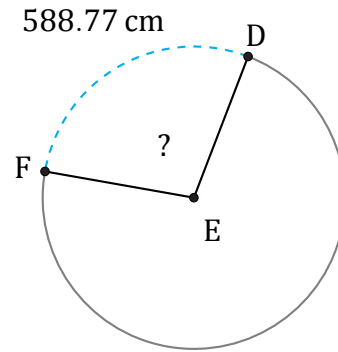
Fecha: _____

Calcule la amplitud angular de cada arco.



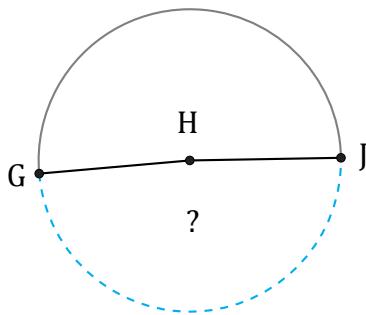
Diámetro = 278 AU

$\angle ABC =$



Diámetro = 668 cm

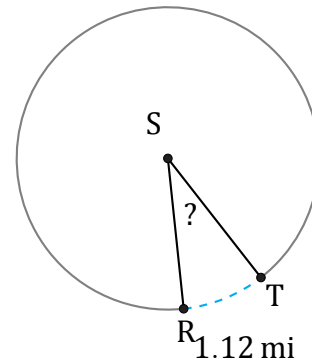
$\angle DEF =$



2942.76 m

Diámetro = 1916 m

$\angle GHJ =$



1.12 mi

Diámetro = 4 mi

$\angle RST =$