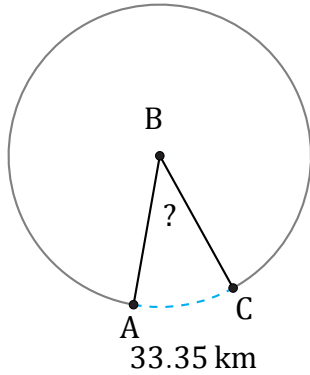


Amplitud de Arcos (J)

Nombre: _____

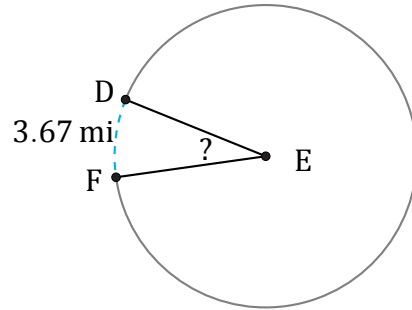
Fecha: _____

Calcule la amplitud angular de cada arco.



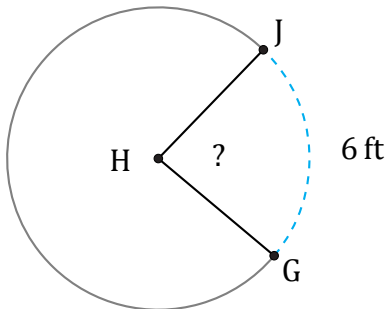
Diámetro = 98 km

$\angle ABC =$



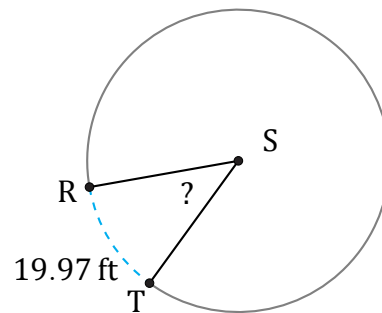
Diámetro = 14 mi

$\angle DEF =$



Diámetro = 8 ft

$\angle GHJ =$



Diámetro = 52 ft

$\angle RST =$