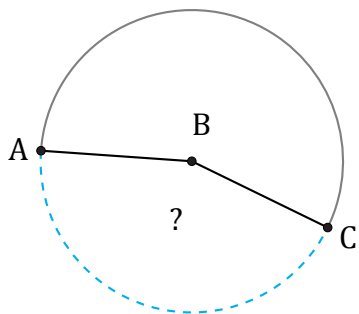


# Amplitud de Arcos (C)

Nombre: \_\_\_\_\_

Fecha: \_\_\_\_\_

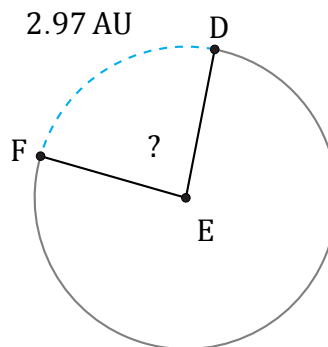
Calcule la amplitud angular de cada arco.



198.55 m

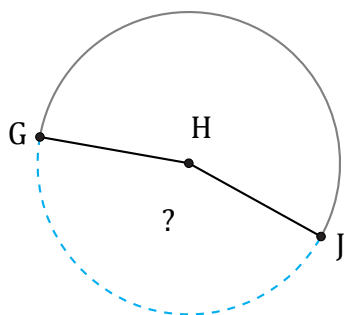
Radio = 72 m

$\angle ABC =$



Radio = 2 AU

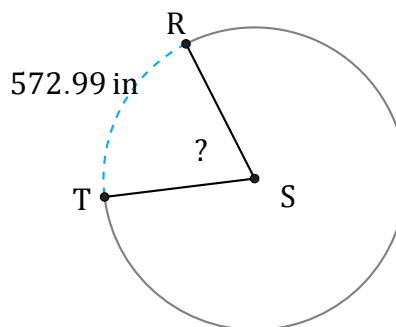
$\angle DEF =$



1983.85 m

Radio = 706 m

$\angle GHJ =$



Radio = 469 in

$\angle RST =$