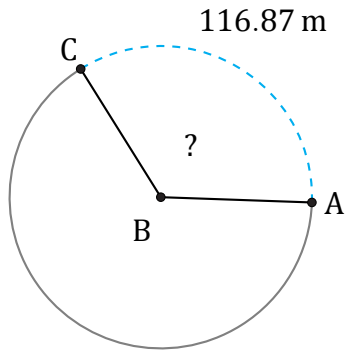


Amplitud de Arcos (D)

Nombre: _____

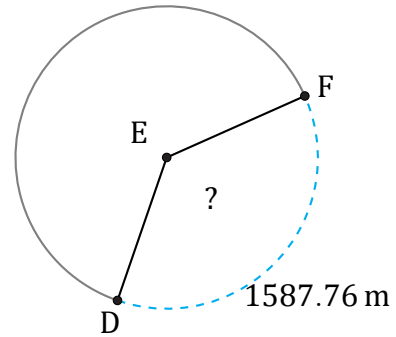
Fecha: _____

Calcule la amplitud angular de cada arco.



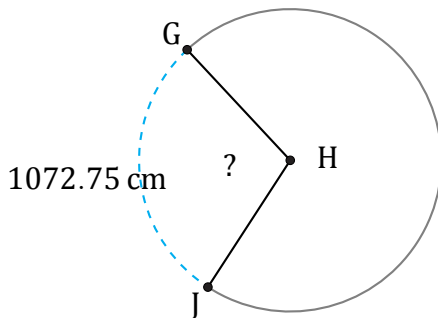
Radio = 54 m

$\angle ABC =$



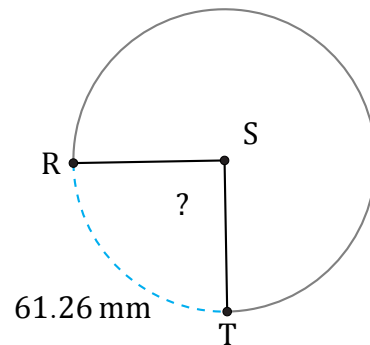
Radio = 684 m

$\angle DEF =$



Radio = 591 cm

$\angle GHJ =$



Radio = 39 mm

$\angle RST =$