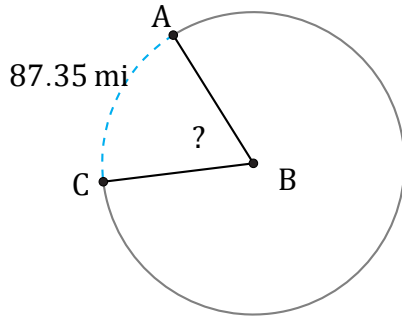


Amplitud de Arcos (E)

Nombre: _____

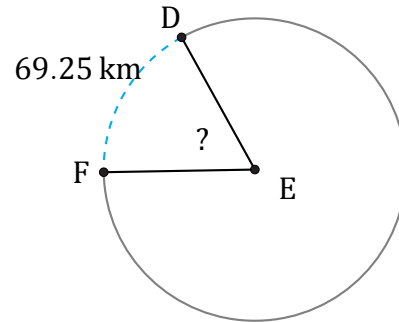
Fecha: _____

Calcule la amplitud angular de cada arco.



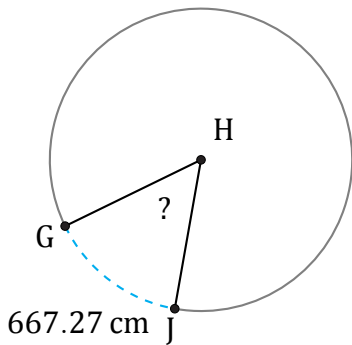
Radio = 77 mi

$\angle ABC =$



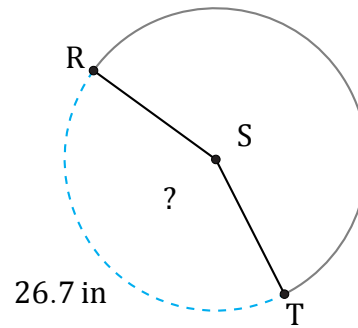
Radio = 64 km

$\angle DEF =$



Radio = 708 cm

$\angle GHJ =$



Radio = 10 in

$\angle RST =$