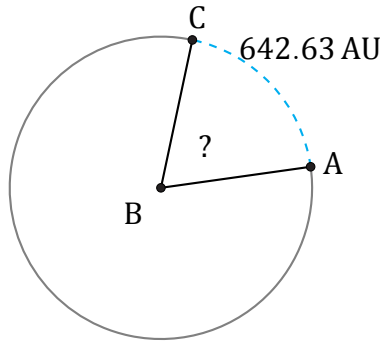


Amplitud de Arcos (F)

Nombre: _____

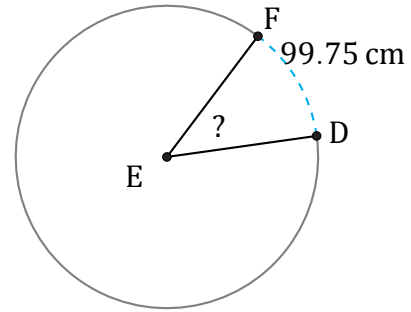
Fecha: _____

Calcule la amplitud angular de cada arco.



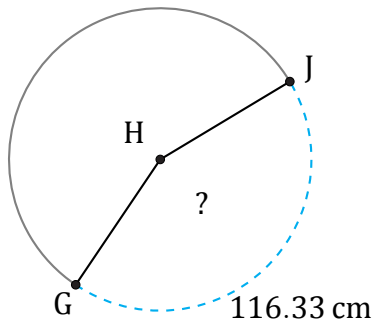
Radio = 526 AU

$\angle ABC =$



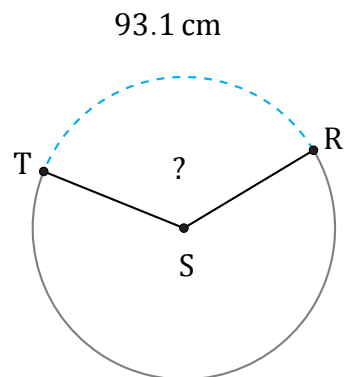
Radio = 127 cm

$\angle DEF =$



Radio = 43 cm

$\angle GHJ =$



Radio = 42 cm

$\angle RST =$