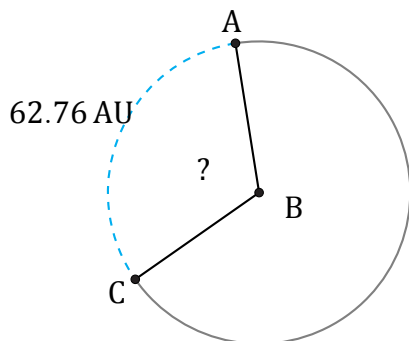


# Amplitud de Arcos (G)

Nombre: \_\_\_\_\_

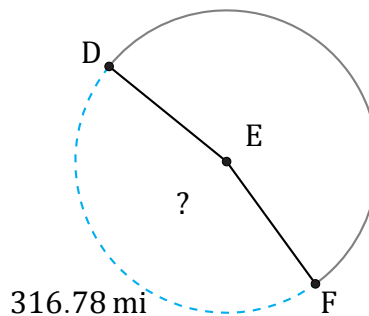
Fecha: \_\_\_\_\_

Calcule la amplitud angular de cada arco.



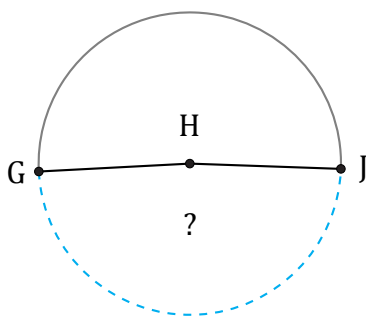
Radio = 31 AU

$\angle ABC =$



Radio = 110 mi

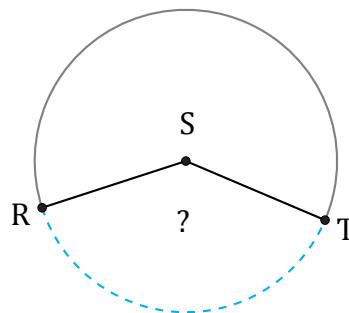
$\angle DEF =$



33.6 km

Radio = 11 km

$\angle GHJ =$



1460.46 mm

Radio = 602 mm

$\angle RST =$