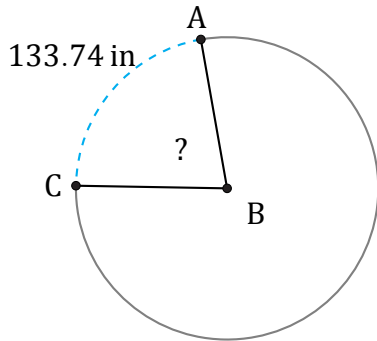


# Amplitud de Arcos (H)

Nombre: \_\_\_\_\_

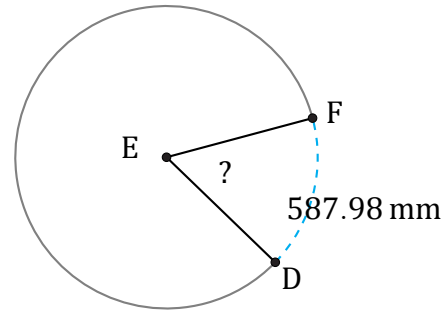
Fecha: \_\_\_\_\_

Calcule la amplitud angular de cada arco.



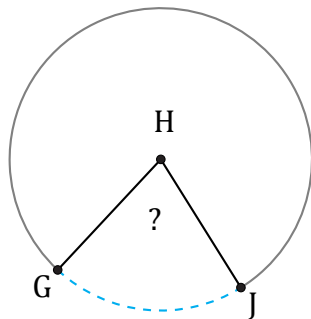
Radio = 97 in

$\angle ABC =$



Radio = 571 mm

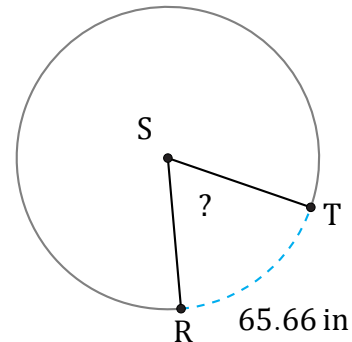
$\angle DEF =$



28.8 mm

Radio = 22 mm

$\angle GHJ =$



Radio = 57 in

$\angle RST =$