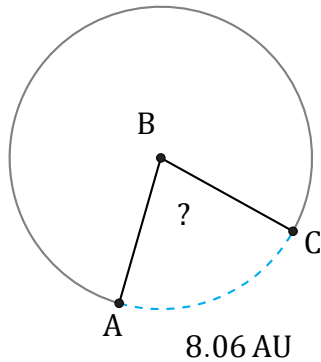


Amplitud de Arcos (I)

Nombre: _____

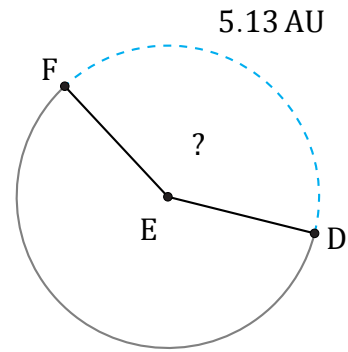
Fecha: _____

Calcule la amplitud angular de cada arco.



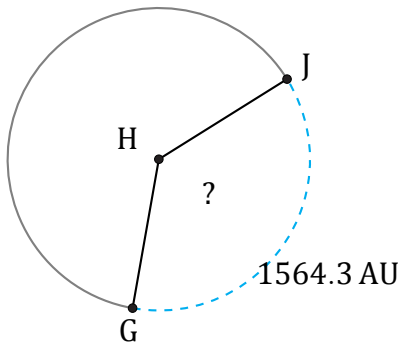
Radio = 6 AU

$\angle ABC =$



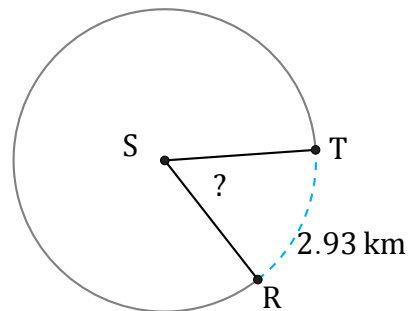
Radio = 2 AU

$\angle DEF =$



Radio = 679 AU

$\angle GHJ =$



Radio = 3 km

$\angle RST =$