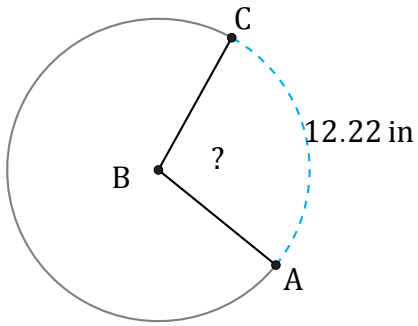


Amplitud de Arcos (A)

Nombre: _____

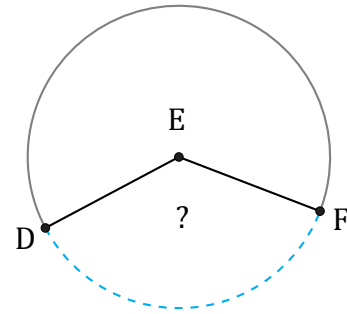
Fecha: _____

Calcule la amplitud angular de cada arco.



Diámetro = 14 in

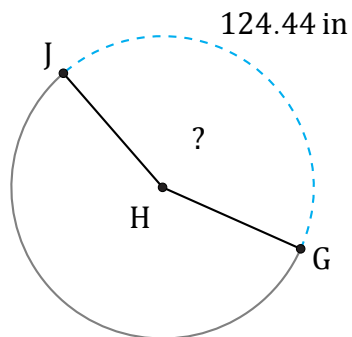
$\angle ABC =$



363.53 mm

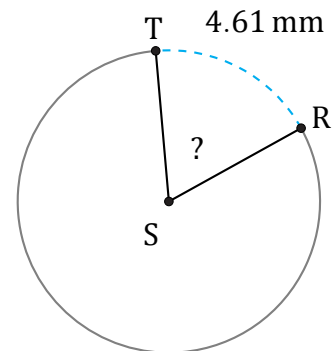
Radio = 159 mm

$\angle DEF =$



Diámetro = 92 in

$\angle GHJ =$



Radio = 4 mm

$\angle RST =$