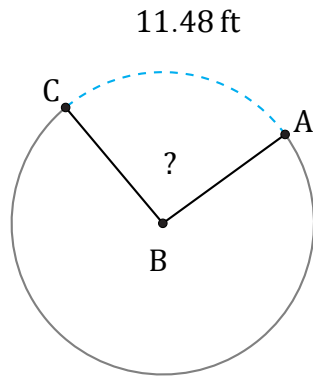


Amplitud de Arcos (B)

Nombre: _____

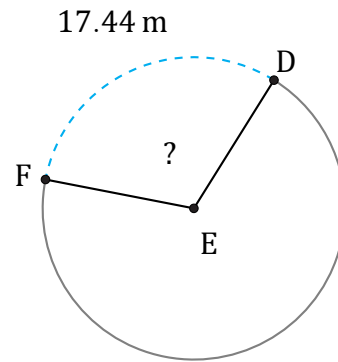
Fecha: _____

Calcule la amplitud angular de cada arco.



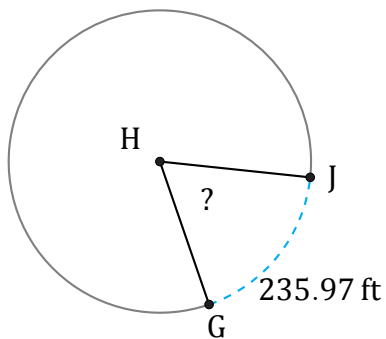
Diámetro = 14 ft

$\angle ABC =$



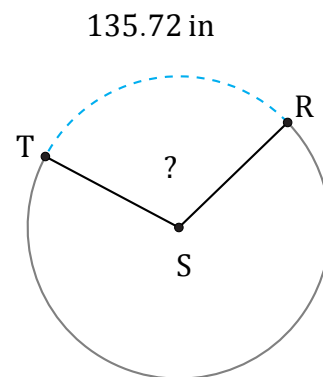
Radio = 9 m

$\angle DEF =$



Diámetro = 416 ft

$\angle GHJ =$



Radio = 72 in

$\angle RST =$