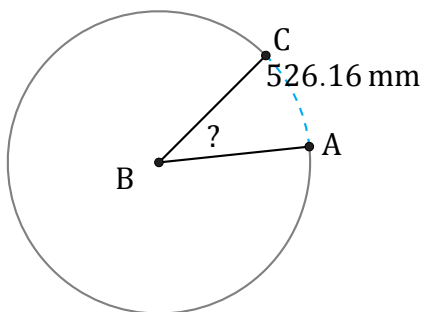


Amplitud de Arcos (C)

Nombre: _____

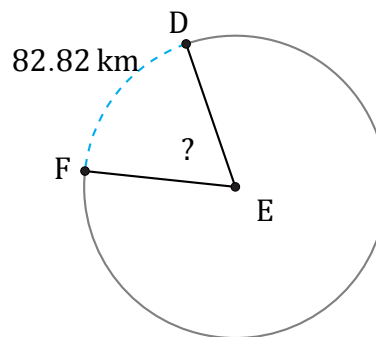
Fecha: _____

Calcule la amplitud angular de cada arco.



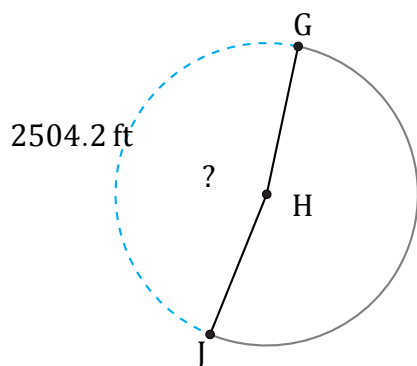
Diámetro = 1546 mm

$\angle ABC =$



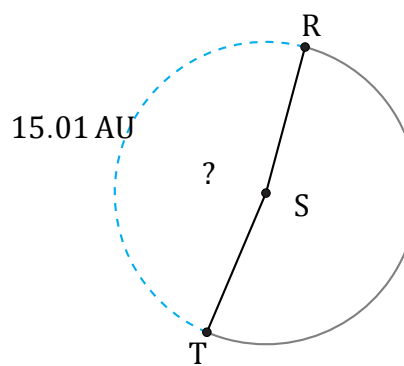
Radio = 73 km

$\angle DEF =$



Radio = 844 ft

$\angle GHJ =$



Diámetro = 10 AU

$\angle RST =$