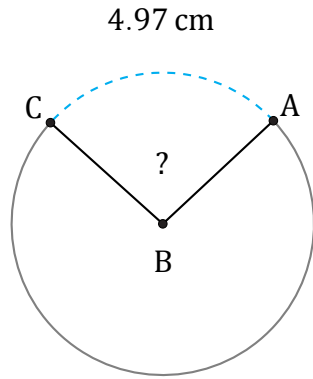


Amplitud de Arcos (E)

Nombre: _____

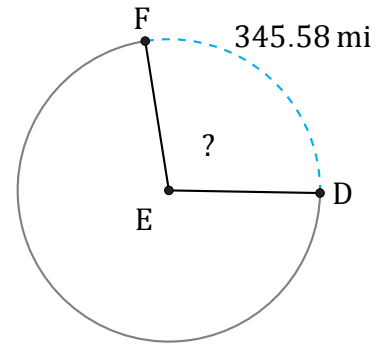
Fecha: _____

Calcule la amplitud angular de cada arco.



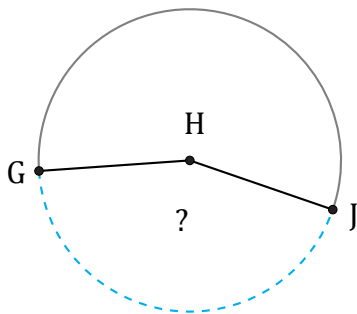
Diámetro = 6 cm

$\angle ABC =$



Radio = 198 mi

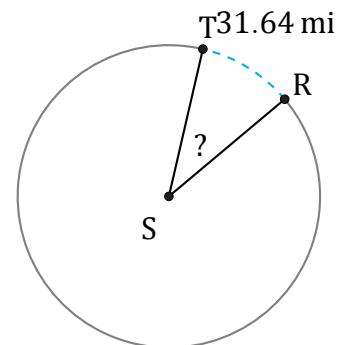
$\angle DEF =$



216.47 in

Radio = 79 in

$\angle GHJ =$



Diámetro = 98 mi

$\angle RST =$