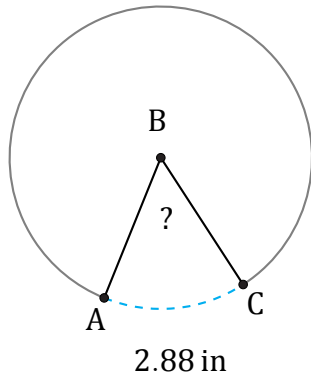


Amplitud de Arcos (F)

Nombre: _____

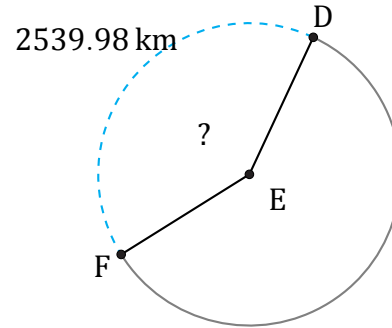
Fecha: _____

Calcule la amplitud angular de cada arco.



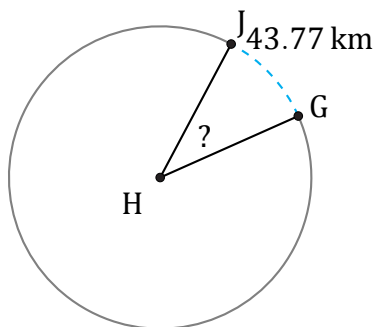
Diámetro = 6 in

$\angle ABC =$



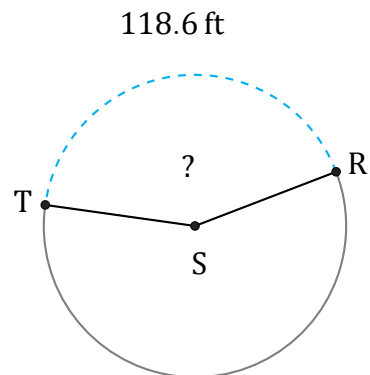
Radio = 990 km

$\angle DEF =$



Radio = 66 km

$\angle GHJ =$



Diámetro = 90 ft

$\angle RST =$