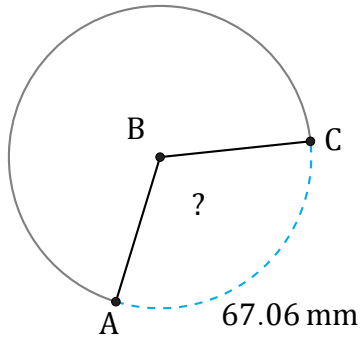


Amplitud de Arcos (G)

Nombre: _____

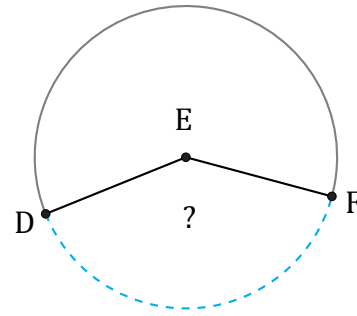
Fecha: _____

Calcule la amplitud angular de cada arco.



Diámetro = 68 mm

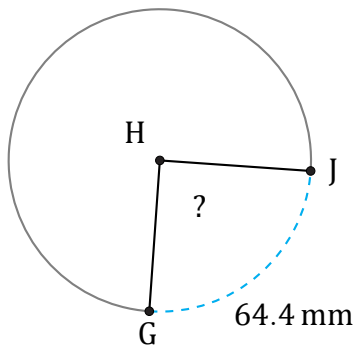
$\angle ABC =$



32.45 cm

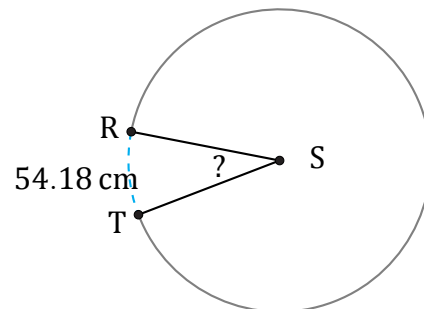
Radio = 13 cm

$\angle DEF =$



Radio = 41 mm

$\angle GHJ =$



Diámetro = 194 cm

$\angle RST =$